



SINDHI HIGH SCHOOL, BENGALURU
ANNUAL EXAMINATION-(2023-24)

SUBJECT -ENGLISH

CLASS 8

Reading Time:8-8:15A.M

DATE:26/3/24

Writing Time: 8:15-11.15A.M.

Max.Marks:80

No of Printed Sides:14

GENERAL INSTRUCTIONS:

This Paper contains three sections:

Section A-Reading 20M

Section B-Writing & Grammar-20M

Section C- Literature-40M

All Sections are compulsory

Adhere to the word limit.

SECTION A READING

1) **Read the text carefully and answer the questions that follow:(20M)**

- 1 The road to success is not straight: there is a curve called failure, a loop called confusion. Speed bumps called friends, caution lights called family and you will have flats called jobs. But if you have a spare called determination, an engine called perseverance, insurance called faith and a driver called God, you will make it to a place called success! In spite of all our planning and preparation, unexpected challenges are certain to arise. The bumps in the road are unavoidable, but you'll never get to your destination, if you aren't willing to drive over them. The difference between a disaster and triumph lies in whether or not you're prepared and willing to weather the storm. If you're ready, those bumps will become stepping-stones.
- 2 The key thing to realize that working harder is same as working smarter. How do you work smart? You just need to have the right skills. People want improved

circumstances and better life without an improved self. They want victory without paying the price or making efforts. It really cannot happen without the other. Any improvements that have not been generated by working on yourself are superficial and short lived. A better future is possible by changing yourself. Stop worrying about the various challenges that will come your way. Just believe in yourself and use them as your stepping stones.

3 "Success", is getting whatever you want out of life without violating the rights of others. It is not an accident. Rather the result of our attitude and our attitude is a choice. Hence success is a matter of choice and not chance. Today success represents a holistic and positive attitude of life. Attitude is everything. Success is not restricted within some kind of brick-and-mortar premises. It assumes individually the complete act executed with perfection.

4 Material achievements do not define life. We don't remember sports stars for the products they endorse but the spirit of achievement they represent. In the abundance of positive attitude underline the grandeur of a truly rewarding rich life. Success can be measured from two standpoints-the external and the internal. Externally it is the measure of a job well done and recognition. Internally it is the feeling of achievement and wholeness derived from the completion of a task or fulfillment of desire.

(1x8=8M)

i) According to the text, which of the following statement is

- a) working harder is same as working smarter
- b) hard work is the only key to success
- c) working smarter is the only way to achieve your goal.
- d) hard work and luck are important to succeed in life.

ii) "If you are ready, those bumps will become stepping stones". Through this sentence the writer tells us to

- a) ignore ups and down while working to achieve our goal.
- b) work with a proper plan to achieve our goal
- c) focus only on our goal and ignore all responsibilities.
- d) take all challenges with strong determination.

iii) Which one of the following quotes captures the central idea of the passage?

i) It is better to fail in originating to succeed in limitation-Herman Melville	ii) Success is not final: failure is not total. It is the courage to continue that counts-Winston Churchill
iii) The road to success and the road to failure are almost exactly the same Collin. R Davies	iv) Success usually comes to those who are busy to be looking for it.

- a) option (i) (b) option (ii) (c) option (iii) (d) option (iv)

iv) Select the option that makes the correct use of 'destination' as used in para 1.

- a) We will reach our destination by 6 O'clock.
- b) She is working hard to reach her destination.
- c) Shimla is her favourite destination.
- d) The cinema hall is the largest entertainment destination in the city.

- v) While disaster is a nightmare, triumph is _____ (as per the passage)
- vi) The synonym of the word 'bounty' as given in para 4 is _____
- vii) A celebrity is not known because of his endorsements but _____
- viii) How do you define "Success"?
- ix) Based on the reading of the passage, describe in about 40 words, how success can be measured. (2M)

II. Read the given passage and answer the questions follow:

1) If you have grown up in the capital city which has been plagued by increasing levels of pollution, a breath of fresh air would be a welcome change any time. And if it is accompanied by lush green gardens overlooking your room, all the better. I reveled in this joyous change of scenery, sipping on a fresh filter kaapi, from the balcony of my King room at the Royal Orchid Brindavan Garden in Mysuru.

2) The journey had been arduous, with a change of flights and then, travel by road. And I had been up quite early. But the thought of the piping hot kaapi kept me going. When I finally reached the rather majestic palace, away from the bustle of the main city of Mysuru, I didn't think my weariness would wear off so easily after a refreshing welcome drink. Twelve hours of travel time is rather strenuous after all, and I was sure I'd want to snuggle under the covers for a bit, at least.

3) My fascination with the Southern part of India began during the one year I spent pursuing my higher education in Chennai. I don't say it lightly when I state that I fell in love with the city, the masala dosas, the beach, the people. I couldn't have been more delighted when I was assigned a trip to Mysuru. It was a chance to go back south, to a different location, but I could barely contain my excitement. The Royal Orchid Brindavan Garden, located an hour away from the main city, is often the first choice for locals looking to escape the daily grind, albeit for a few days. Frequented equally by bird-watchers and photographers, the property provides an unmatched view of the gardens as well as the KRS (Krishna Raja Sagar) dam.

4) All the rooms face the gardens, so you can cherish their stunning symmetry from the comfort of your room, with a cup of kaapi in your hands. The heritage property features 24 select spacious rooms with a private balcony. The canopy beds, wooden flooring and the colossal doors, all exude an old-world vintage charm.

Mysuru's weather, is much like close-by neighbour Bengaluru, it is pleasant for most part of the day, the evenings are undeniably better. To further strengthen my belief, a quiet dinner at open-air Elephant Bar was enough. Over a scrumptious meal, I was told of the many films that had been shot at the property, including massive hits like Linga and KGF.

1) Which city does the writer originally belong to as mentioned in the passage? (1×10=10M)

- a) Bangalore b) Mumbai
c) New Delhi d) Mysuru

ii) A phrase is a small group of words standing together as a unit. The writer mentions that 'I didn't think my weariness would wear off so easily.' Select the words from the options that is a correct phrase using 'wear'.

a) Wear your heart on your sleeves

b) Wear too many bands

c) Wear up

d) Wear down

iii) Select the option that suitably completes the given dialogue as per the context in paragraph

X: How can I help you Sir?

Y: Please check my passport (1) _____

X: Which place are you visiting? Y: (2) Going to (2) _____

a)(1) I am excited to fly to South India (2) Mysuru in Bangalore

b) (1) I am excited to fly to India (2) Visit my hometown

c)(1) Could you assign me a window seat? (2) South India to my hometown

d) (1) Hope I can check in easily now (2) visit my friends at Bangalore

iv) Which option represents the features that attracted the writer towards 'The Royal Orchid Brindavan Garden'?

a) The heritage property features 24 select spacious rooms facing the garden

b) The rooms overlook the beautiful Brindavan Gardens as well as the KRS dam.

c)The in-house spa offers rejuvenating treatments.

d) It offers indoor and outdoor games with an entertainment zone.

(a) a and b

(b) b and c

(c) c and d

(d) Only d

v) I didn't

think my weariness would wear off so easily after a refreshing welcome drink. Explain

vi) Select the option that is correct with reference to the given passage.

- a) Bangalore and Mysore have a pleasant weather only at nights
- b) The writer did his higher education in Bangalore
- c) The writer travelled for less than ten hours to reach the Royal Orchid Brindavan Garden in Mysuru
- d) The writer is fond of drinking filter coffee

vii) The first choice for locals looking to escape the daily grind, albeit for days. The word "albeit" in the context of the passage means:

- a) Unless
- b) Instead
- c) And
- d) Though

viii) Which of the following reasons attract the people towards the Royal Orchid Brindavan Garden as described by the writer in the passage?

- a) The hotel's courtyard-style coffee shop and Elephant Bar - both offer balcony-views of Brindavan Gardens.
- b) It exudes charm and grandeur of the Maharajas era.
- c) The hotel features a swimming pool engulfed in greens.
- d) Royal Orchid Brindavan Garden and Spa is a 4-hour drive from Bangalore

ix) Which quote best summarizes the writers' description about the love for the South Indian food?

- a) The body becomes what the foods are, as the spirit becomes what the thoughts are – Unknown Proverb
- b) If you don't love South Indian cuisine, you are either an alien or your taste buds are spoiled–An Indian Citizen
- c) The only thing I like better than talking about food is eating –John Walters
- d) I've never been in love before. But I can imagine its similar to the feeling you get when you see your waiter arriving with your food –Zach Galifianakis.

x) "Twelve hours of travel time is rather strenuous after all." What does the writer mean to say in this statement?

- a) His journey has been memorable and comfortable
- b) His journey was quite hectic and exhausting
- c) His travel route was very long
- d) His journey required lots of energy

III) SECTION : B Writing And Grammar (2x5=10M)

A. You are Ritesh/Ritika Gupta, a student of class VIII of St Xavier's School, Bangalore. You feel that in spite of starting the metro train service on so many routes, the condition of traffic on the roads is still bad. You find it disturbing that the number of vehicles on roads is increasing steadily. You want people to contribute for tackling this problem. Write a letter to The Editor of Times of India, on the topic, '**Traffic Woes and Solutions**'. (100-120 words)

Clues-

Very heavy taxes on purchase of new vehicles

Encourage people to use public transport

Use car pooling

B. You are Manish/ Manara of class VIII. Prepare a speech to present in your school assembly on the topic "**LIFE IN A COUNTRYSIDE PREFERABLE TO LIFE IN A CITY**". Use the information given below to develop your speech in 120-150 words. **COUNTRY (A VILLAGE)** peace and quiet—soothing air—fresh and pure green fields all around—lovely sight helpful neighbours. **CITY** -vehicles—smoke industries—smoke-pollution, crowded streets, people hurry—never relax

IV. Complete the following tasks, ANY TEN as directed: (1×10=10M)

i. Complete the line from a self-awareness song, by filling the blank with the correct option.

My Mother is not the sort of Mum

Who'll _____ and faint and shiver, Darkness doesn't scare her,

When it thunders, she won't _____!

be squealing, quiver

squeal, be quiver

squeal, quiver

be squealing, have been quivered

ii. The center constituted a high-level technical team to resolve _____ Cauvery water dispute _____ Karnataka and Tamil Nadu. **[Fill in the blanks with articles and prepositions]**

iii. We should not show cruelty to animals. [Rewrite using the adjective form of the underlined words]

iv. The mother said to her son, 'Where have you been throughout the day?' (Turn into indirect Speech)

v. Read the given sentence from a recipe review article. Identify the error and supply the correction in the sentence.

This delightful recipe must keep your hunger pangs at bay with its balanced spices and oriental flavour.

Use the given format for your response

ERROR	CORRECTION
-------	------------

vi. Fill in the blanks in the letter given below by choosing the appropriate option.

Dear Mrs. Radhika, Despite _____ (much/several/lets/infrequent) calls over the past three weeks to your office, no action _____ (were taken/had been taken/ has been taken/ take) regarding the two abandoned cars parked outside my house.

vii. The girl has kept the promise. [Change the voice]

viii. Fill in the blank by choosing the right option to complete on a live feed on school news channel:

Congratulations Changemakers,

The regional competition results have been announced and our school music club _____ the first prize.

- a) has
- b) will win

- c) has won
- d) has been won

ix. Select the option that identifies the error and supplies the correction for the closing line, from an analytical report.

In conclusion, this study explores the association among short-sleep pattern and overweight youngsters.

Option	Correction	Error
1	explores	explore
2	and	or
3	among	between
4	in	for

x. You _____ consult the thesaurus if you need groups of synonyms for those.

- a) need
- b) need to
- c) had to
- d) used do

xi. Fill the blank by choosing the correct option to complete the paragraph.

Speaking to his daughter affectionately, father asked her to pass some salt. The daughter quickly passed the salt and praised her mother

- (a) if the delicious apple pie
- (b) that the apple pie was yummy
- (c) that the apple pie is yummy
- (d) None of these

xii. Complete the given narrative, by filling the blank with the correct option.

The experience of nursing an injured bird left me _____ grateful for knowing the importance of being kind and compassionate to all creatures.

- (a) feeling (b) having felt (c) felt (d) feels

IV. SECTION: C (Literature)

(4 0 M)

Complete the following extracts:

A) "He was afraid that it might kick and bleat at sight and smell of its mother. He skirted the clearing and pushed its way into the thicket. It was difficult to fight through with his burden. The fawn's legs caught in the bushes and he could not lift his own with freedom. He tried to shield its face from prickling vines. Its head bobbed with its stride. His heart thumbed with the marvel of its acceptance of him."

i. Who is the 'it' in the first line of the passage? (1x4=4M)

- a) The doe (b) The fawn (c) Mill-wheel (d) Jody.

ii. Pick two sensory terms from the passage.

- (a) Kick and bleat (b) Sight and smell (c) Bobbed and thumbed (d) Skirted and clearing

iii. While carrying the fawn back home, Jody was afraid because he taught?

- (a) The fawn may get out of control at the sight of its mother.
(b) The Mil-wheel might follow him.
(c) He might not be able to carry the fawn.
(d) He might not like it.

iv. State the meaning of the expression, "Marvel of its acceptance of him."

- (a) Jody was overwhelmed by the fact that the fawn had surrendered itself to Jody.
- (b) It had not accepted Jody and the decisions Jody took to protect it.
- (c) Jody was very unhappy
- (d) shocked with Jody's decision.

B) It drives all joy away

(1x4=4M)

Under a cruel eye outworn
The little ones spend the day
In sighing and dismay.

I. Who is the speaker of these lines?

- a) The school Boy b) Mother c) father d) School Boy's friend

II. Whose plight is the school boy describing?

- a) School's plight b) School boys parents plight c) His own plight d) Plight of others

III. The rhyming scheme of the above lines is

- a) aabb b) abba c) abaa d) baba

iv. Sighing is expressing sadness, dismay ____

- a) being overjoyed b) grief c) distress d) highly comfortable

V. Answer any 5 of the following in 20- 30 words: (2x5=10M)

- I. Differentiate the character traits of Hafeez Contractor with yourself.**
- II. Sketch the character traits of Ahluwalia**
- III. Compare and contrast the characters of Princess September**

and her other eight sisters.

iv. Describe in brief the author's meeting with Connie?

v. How does Jaya portray the act of empathy and kindness?

vi. Accentuate the difference in outlook of Duttada and his wife in respect of the new comet. Who do you support and Why?

VI. Answer any 3 of the following in 40-50 words: (3x4=12)

i. Describe how love changed the giant.

ii. What similarities do you find between Vera and Chunnilal?

iii. How do you connect with "Ant and the Cricket" and "On the Grasshopper and the Cricket" poems?

iv. The poem "Last Bargain", shows that innocence manages to buy what power, wealth and beauty failed to buy. Justify

VII. Long Answer type :-

(1x5=5M)

A. "I haven't been brave", said his disembodied computer-voice, the next afternoon, "I've had no choice".

With reference to the above statement, write an account in the form of diary entry, of your feelings imagining yourself to be Stephen Hawking in 100-120 words.

OR

B. Imagine you are Jim Macpherson. Record your feelings post-war, when you visit your village in about 100-120 words.

VIII. Long Answer type :-

(1x5=5M)

A. The lesson "Jalebis", teaches us that we should think before doing anything. It also teaches us that we cannot blindly depend on prayers for the fulfilment of our needs. Justify how the above statement proved true with the young boy in "Jalebis".

OR

B. Ego played an important role in the lesson, "The fight". How did the two boys overcome it.



SINDHI HIGH SCHOOL, BENGALURU
ANNUAL EXAMINATION (2023-24)
SUBJECT - KANNADA

Class: VIII

Date: 21/03/2024

Number of printed sides: 8

Marks: 80

Reading Time: 15 mins

Writing Time: 3 hrs

ಸೂಚನೆಗಳು:

- ಈ ಪ್ರಶ್ನೆ ಪತ್ರಿಕೆಯಲ್ಲಿ ಒಟ್ಟು 15 ಮುಖ್ಯ ಪ್ರಶ್ನೆಗಳಿರುತ್ತವೆ.
- ಈ ಪ್ರಶ್ನೆ ಪತ್ರಿಕೆಯು ಭಾಗ A ಮತ್ತು ಭಾಗ B ಎಂಬ ಭಾಗಗಳನ್ನು ಮತ್ತು A B C D ಎಂಬ ನಾಲ್ಕು ವಿಭಾಗಗಳನ್ನು ಒಳಗೊಂಡಿರುತ್ತವೆ.
- ವಿಭಾಗ A ನಲ್ಲಿ ಒಟ್ಟು 4 ಮುಖ್ಯ ಪ್ರಶ್ನೆಗಳು, 10 ಬಹು ಆಯ್ಕೆಯ ಉಪ ಪ್ರಶ್ನೆಗಳು ಮತ್ತು ಬರವಣಿಗೆಯ 10 ಪ್ರಶ್ನೆಗಳಿರುತ್ತವೆ.
- ಭಾಗ A ಅನ್ವಯಿಕ ವ್ಯಾಕರಣದಲ್ಲಿ 10 ಬಹು ಆಯ್ಕೆಯ ಪ್ರಶ್ನೆಗಳು, 5 ಬರವಣಿಗೆಯ ಪ್ರಶ್ನೆಗಳು ಮತ್ತು ಪಠ್ಯಪೂರಕವೆ 5 ಬಹು ಆಯ್ಕೆ ಪ್ರಶ್ನೆಗಳಿಗೆ ಉತ್ತರಿಸಬೇಕು.
- ಭಾಗ B - (ಬರವಣಿಗೆಯ ಕೌಶಲ್ಯ) ವಿಭಾಗ C ನ ಎಲ್ಲಾ ಪ್ರಶ್ನೆಗಳಿಗೆ ಉತ್ತರಿಸಬೇಕು.
- ಭಾಗ B (ಪಠ್ಯಗಳ ಅಧ್ಯಯನ) ಅಲ್ಲಿನ ವಿಭಾಗ - D ಯಲ್ಲಿಯ 11 ರಿಂದ 15 ಮುಖ್ಯ ಪ್ರಶ್ನೆಗಳಿಗೆ ಅಲ್ಲಿ ಕೊಟ್ಟಿರುವ ಸೂಚನೆಯಂತೆ ಉತ್ತರಿಸಬೇಕು.

ಭಾಗ-A (40 ಅಂಕಗಳು)	ವಾಚನ ಮತ್ತು ಗ್ರಹಿಕಾ ಕೌಶಲ್ಯ	20 ಅಂಕಗಳು
	ಅನ್ವಯಿಕ ವ್ಯಾಕರಣ	15 ಅಂಕಗಳು
	ಬಹು ಆಯ್ಕೆ ಪ್ರಶ್ನೆ - ಪಠ್ಯಗಳ ಅಧ್ಯಯನ	05 ಅಂಕಗಳು
ಭಾಗ-B (40 ಅಂಕಗಳು)	ಬರವಣಿಗೆ ಕೌಶಲ್ಯ	12 ಅಂಕಗಳು
	ಪಠ್ಯಗಳ ಅಧ್ಯಯನ	28 ಅಂಕಗಳು
	ಒಟ್ಟು ಅಂಕಗಳು	80 ಅಂಕಗಳು

PART-A (40 ಅಂಕಗಳು)

SECTION-A

(ವಾಚನ ಮತ್ತು ಗ್ರಹಿಕಾ ಕೌಶಲ್ಯ) = 10 ಅಂಕಗಳು

I. ಕೆಳಗಿನ ಗದ್ಯಾಂಶವನ್ನು ಓದಿಕೊಂಡು, ಅದರ ಕೆಳಗೆ ಕೊಟ್ಟಿರುವ ಬಹು ಆಯ್ಕೆ ಪ್ರಶ್ನೆಗಳಿಗೆ ಉತ್ತರ ಬರೆಯಿರಿ. 1x5=5

ಲಾಲ್ ಬಹಾದೂರ್ ಶಾಸ್ತ್ರಿಯವರು ಮುಘಲ್ ಸರಾಯಿ ಎಂಬ ಹಳ್ಳಿಯಲ್ಲಿ ಗಾಂಧಿ ಜಯಂತಿ ದಿನ ೧೯೦೪ರಲ್ಲಿ ಹುಟ್ಟಿದರು. ತಂದೆ ಶಾರದಾ ಪ್ರಸಾದ್, ತಾಯಿ ರಾಮದುಲಾರಿ ದೇವಿ. ಒಂದು ವರ್ಷದ

ಕೂಸು ಇರುವಾಗಲೇ ಲಾಲ್ ಬಹದ್ದೂರರು ತಂದೆಯನ್ನು ಕಳೆದುಕೊಂಡರು. ಮಗುವಿನೊಡನೆ ತಾಯಿ ತನ್ನ ತಂದೆ ಹಜಾರಿಲಾಲರನ್ನು ಆಶ್ರಯಿಸಿದಳು.

ಅಜ್ಜನ ಮನೆಯಲ್ಲಿ ೧೦ ವರ್ಷ ಕಳೆಯುವ ಹೊತ್ತಿಗೆ ಲಾಲ್ ಬಹದ್ದೂರರು ೬ನೇ ತರಗತಿ ಮುಗಿಸಿದರು. ಮುಂದಿನ ವಿದ್ಯಾಭ್ಯಾಸಕ್ಕಾಗಿ ವಾರಣಾಸಿಯ ಹರಿಶ್ಚಂದ್ರ ಪ್ರೌಢಶಾಲೆಯನ್ನು ಪ್ರವೇಶಿಸಿದರು. ಚಿಕ್ಕಂದಿನಿಂದಲೂ ಓದಾಳಿಯಾದ ಅವರಿಗೆ ಗುರು ನಾನಕರ ಪದ್ಯಗಳೆಂದರೆ ತುಂಬಾ ಇಷ್ಟ.

"ಸ್ವರಾಜ್ಯ ನಮ್ಮ ಜನ್ಮ ಸಿದ್ಧ ಹಕ್ಕು" ಎಂಬ ತಿಲಕರ ಮಾತು ಕೇಳಿದಾಗ ಹತ್ತು-ಹನ್ನೆರಡು ವಯಸ್ಸಿನ ಬಾಲಕನಾದ ಅವರ ಮೈ ಉಬ್ಬಿತು. ಗಾಂಧೀಜಿಯವರ ಭಾಷಣವು ಅವರಲ್ಲಿ ಮಿಂಚಿನ ಹೊಳೆಯನ್ನೇ ಹರಿಸಿತು. ೧೯೨೧ರ ಅಸಹಕಾರ ಆಂದೋಲನದ ಕಾಲಕ್ಕೆ ೧೭ ವಯಸ್ಸಿನ ಲಾಲ್ ಬಹದ್ದೂರರು ಶಾಲೆ ಬಿಟ್ಟು ಹೊರಬಂದರು. ಮೆರವಣಿಗೆಯಲ್ಲಿ ಭಾಗವಹಿಸಿದ್ದಕ್ಕೆ ಅವರನ್ನು ಪೊಲೀಸರು ಬಂಧಿಸಿದರು. ಆದರೆ ಬಾಲಕನೆಂದು ಆಗಲೇ ಬಿಟ್ಟುಬಿಟ್ಟರು. ಮುಂದೆ ೧೯೩೦ರ ಉಪ್ಪಿನ ಸತ್ಯಾಗ್ರಹದಲ್ಲಿ ಪ್ರಮುಖ ಪಾತ್ರವಹಿಸಿ ಎರಡೂವರೆ ವರ್ಷ ಸೆರೆಮನೆ ಸೇರಿದರು. ಅವರಿಗೆ ಏಳು ಬಾರಿ ಶಿಕ್ಷೆಯಾಗಿ, ಒಟ್ಟು ಒಂಭತ್ತು ವರ್ಷ ಸೆರೆಮನೆಯಲ್ಲಿ ಕಳೆದರು. ಸೆರೆಮನೆಯಲ್ಲಿಯೂ ಆದರ್ಶ ಕೈದಿ; ಶಿಸ್ತು- ಸಂಯಮ ಮಾದರಿಯದು.

ಬಹುತರ ಎಲ್ಲಾ ಆಂದೋಲನಗಳಲ್ಲಿ ಅವರು ಪ್ರಾಮಾಣಿಕವಾಗಿ ಭಾಗವಹಿಸುತ್ತಲೇ ಇದ್ದರು. ಸ್ವತಂತ್ರ ಭಾರತದಲ್ಲಿ ಆಡಳಿತ ಸಂಘಟನಾ ಚಾತುರ್ಯದಿಂದ ಕೇಂದ್ರ ಸರ್ಕಾರದಲ್ಲಿ ಒಂದಾದ ಮೇಲೊಂದು ಮಂತ್ರಿ ಪದವಿಯನ್ನು ಪಡೆದು ಸತತವಾಗಿ ೧೭ ವರ್ಷ ದಕ್ಷರಾಗಿ ಕಾರ್ಯನಿರ್ವಹಿಸುತ್ತಾ ಬಂದರು. ಆ ಬಳಿಕ ೧೯೬೪ ರಲ್ಲಿ ತೆರವಾದ ಭಾರತ ಪ್ರಧಾನಿ ಪಟ್ಟವನ್ನು ಮಹಾಸೇವೆಯೆಂದು ಹೊತ್ತರು. ಅವರ "ಜೈ ಜವಾನ್ ಜೈ ಕಿಸಾನ್" ಎಂಬ ಮಂತ್ರ ಇಂದಿಗೂ ನಿನಾದಿಸುತ್ತಿದೆ.

ಪ್ರಶ್ನೆಗಳು:

1. ಲಾಲ್ ಬಹದ್ದೂರ್ ಶಾಸ್ತ್ರಿ, ಅವರು ತಮ್ಮ 17ನೇ ವಯಸ್ಸಿನಲ್ಲಿ ಭಾಗವಹಿಸಿದ್ದ ಆಂದೋಲನ _____
 A) ಉಪ್ಪಿನ ಸತ್ಯಾಗ್ರಹ B) ಅಸಹಕಾರ ಆಂದೋಲನ
 C) ಕ್ವಿಟ್ ಇಂಡಿಯಾ ಚಳುವಳಿ D) ರಾಷ್ಟ್ರೀಯ ಚಳುವಳಿ
2. ಲಾಲ್ ಬಹದ್ದೂರ್ ಶಾಸ್ತ್ರಿ, ಅವರು ಹುಟ್ಟಿದ್ದು _____
 A) 2.10.1904 B) 10.2.1904 C) 2.10.1940 D) 2.10.1604
3. "ಸ್ವರಾಜ್ಯ ನಮ್ಮ ಜನ್ಮ ಸಿದ್ಧ ಹಕ್ಕು" ಎಂದು ಹೇಳಿದವರು _____
 A) ಲಾಲ್ ಬಹದ್ದೂರ್ ಶಾಸ್ತ್ರಿ B) ತಿಲಕ C) ಗೋಖಲೆ D) ಗಾಂಧೀಜಿ
4. ಶಾಸ್ತ್ರಿಯವರು ಭಾರತದ _____ ಪಟ್ಟವನ್ನು ಮಹಾಸೇವೆ ಎಂದು ಹೊತ್ತರು.
 A) ರಾಷ್ಟ್ರಪತಿ B) ನ್ಯಾಯಾಧೀಶ C) ಪ್ರಧಾನಿ D) ರಾಜ್ಯಪಾಲ
5. ಲಾಲ್ ಬಹದ್ದೂರರು ಮುಂದಿನ ವಿದ್ಯಾಭ್ಯಾಸಕ್ಕಾಗಿ _____ ಗೆ ಹೋದರು.
 A) ಬನವಾಸಿ B) ವಾರಂಗಲ್ C) ವಾತಾಪಿ D) ವಾರಣಾಸಿ

II. ಕೆಳಗಿನ ಗ್ರಂಥಾಂಶವನ್ನು ಓದಿಕೊಂಡು, ಅದರ ಕೆಳಗೆ ಕೊಟ್ಟಿರುವ ಬಹು ಆಯ್ಕೆ ಪ್ರಶ್ನೆಗಳಿಗೆ ಉತ್ತರ ಬರೆಯಿರಿ.

1x5=5

ಶ್ರೀ ಕೃಷ್ಣದೇವರಾಯನು ವಿಜಯನಗರ ಸಾಮ್ರಾಜ್ಯವನ್ನು ಆಳುತ್ತಿದ್ದ ಕಾಲ ಆತನ ಆಸ್ಥಾನದಲ್ಲಿ ಒಂಬತ್ತು ಮಂದಿ ಮಹಾ ಪಂಡಿತರಿದ್ದರು. ಅವರನ್ನು ನವರತ್ನಗಳೆಂದು ಕರೆಯುತ್ತಿದ್ದರು. ಆ ಒಂಬತ್ತು ಮಂದಿಯಲ್ಲಿ ರಾಮಕೃಷ್ಣನೂ ಒಬ್ಬ.

ರಾಮಕೃಷ್ಣನು ಆಂಧ್ರ ಪ್ರದೇಶದ ಗ್ರಾಮದವನಾಗಿದ್ದರಿಂದ ಎಲ್ಲರೂ ಅವನನ್ನು ತೆನಾಲಿರಾಮಕೃಷ್ಣ ಎಂದೇ ಕರೆಯುತ್ತಿದ್ದರು. ರಾಮಕೃಷ್ಣ ಮಹಾ ಪಂಡಿತನಾಗಿದ್ದು, ಮಹಾ ಹಾಸ್ಯಗಾರನೂ ಆಗಿದ್ದು ಅವನ ಹೆಸರಿನಲ್ಲಿ ಬೇಕಾದಷ್ಟು ಕಥೆಗಳಿವೆ. ಆ ಎಲ್ಲಾ ಕಥೆಗಳಲ್ಲೂ ಅವನ ಜಾಣತನ, ಹಾಸ್ಯ ತುಂಬಿ ತುಳುಕುತ್ತದೆ. ಅವನು ತನಗೆ ಎಂತಹ ಅಪಾಯ ಬಂದರೂ ತನ್ನ ಪಾಂಡಿತ್ಯ ಹಾಗೂ ಉಪಾಯಗಳನ್ನು ಬಳಸಿ ಅದರಿಂದ ಪಾರಾಗಿ ಬಿಡುತ್ತಿದ್ದ. ಆದ್ದರಿಂದ ಅವನನ್ನು 'ವಿಕಟಕವಿ' ಎಂದು ಕರೆಯುತ್ತಿದ್ದರು. ಅವನು ಆ ಹೆಸರಿನಿಂದ ಪ್ರಸಿದ್ಧಿಗೂ ಬಂದಿದ್ದ. ತೆನಾಲಿ ರಾಮಕೃಷ್ಣನು ಹೇಗೆ ವಿಕಟಕವಿಯಾಗಿ ಪ್ರಸಿದ್ಧಿಗೆ ಬಂದ ಎನ್ನುವುದಕ್ಕೆ ಒಂದು ಕಥೆ ಇದೆ.

ಒಮ್ಮೆ ಮಹಾತ್ಮರೊಬ್ಬರು ಹೇಳಿದಂತೆ ತೆನಾಲಿ ರಾಮಕೃಷ್ಣನು ಪ್ರತಿದಿನವೂ ಸ್ನಾನ ಮಾಡಿ ಕಾಳಿಕಾದೇವಿಯ ಮಂದಿರಕ್ಕೆ ಹೋಗಿ ದೇವೀವಿಗ್ರಹದ ಮುಂದೆ ಕುಳಿತು ಆತ ಹೇಳಿಕೊಟ್ಟ ಮಂತ್ರವನ್ನು ಭಕ್ತಿಯಿಂದ ಹೇಳುತ್ತಿದ್ದನು. ಮುಂದೆ ಒಂದು ದಿನ ದೇವಿಯು ಪ್ರತ್ಯಕ್ಷವಾಗಿ ಅವನನ್ನು ಪ್ರೀತಿಯಿಂದ ಮೂತನಾಡಿಸಿ ಆಶೀರ್ವದಿಸಿದಳು. ಬಳಿಕ ಆಕೆಯು ಒಂದು ಹಾಲಿನ ಬಟ್ಟೆ ಮತ್ತು ಒಂದು ಮೊಸರಿನ ಬಟ್ಟೆ ಮತ್ತು ಅವನ ಮುಂದೆ ಹಿಡಿದಳು. "ಎಲೈ ರಾಮಕೃಷ್ಣನೇ, ಈ ಬಟ್ಟೆಗಳಲ್ಲಿರುವ ಹಾಲು ಕುಡಿದರೆ ನೀನು ಮಹಾಪಂಡಿತ ನಾಗುವೆ, ಈ ಬಟ್ಟೆಯಲ್ಲಿರುವ ಮೊಸರು ಕುಡಿದರೆ ನೀನು ಮಹಾ ಶ್ರೀಮಂತನಾಗುವೆ. ಇವೆರಡರಲ್ಲಿ ನಿನಗೆ ಯಾವುದು ಬೇಕೋ ಅದನ್ನು ತೆಗೆದುಕೋ" ಎಂದಳು.

ಆಗ ಮಹಾ ಬುದ್ಧಿವಂತನಾದ ರಾಮಕೃಷ್ಣನು ಒಂದು ಕ್ಷಣ ಯೋಚನೆ ಮಾಡಿದ. ಅನಂತರ ದೇವಿಯ ಕೈಯಲ್ಲಿದ್ದ ಎರಡೂ ಬಟ್ಟೆಗಳನ್ನು ತೆಗೆದುಕೊಂಡು ಗಟಗಟನೆ ಕುಡಿದು ಬಿಟ್ಟ. ಇದರಿಂದ ದೇವಿಗೆ ಕೋಪ ಬಂದು ಆಕೆಯು "ಎಲವೋ ರಾಮಕೃಷ್ಣ, ಎರಡೂ ಬಟ್ಟೆಗಳನ್ನು ಏಕೆ ತೆಗೆದುಕೊಂಡೆ?" ಎಂದು ರೇಗಿದಳು. ಅದಕ್ಕೆ ಅವನು "ಹೇ ಮಾತೆ, ದಯವಿಟ್ಟು ಕೋಪಿಸಿಕೊಳ್ಳಬೇಡ. ಈ ಮನುಷ್ಯ ಲೋಕದಲ್ಲಿ ನಮ್ಮದಿಯಿಂದಲೂ, ಗೌರವದಿಂದಲೂ ಬಾಳಬೇಕಾದರೆ ಪಾಂಡಿತ್ಯ, ಹಣ ಎರಡೂ ಬೇಕಾಗುತ್ತದೆ. ಆದ್ದರಿಂದಲೇ ಹೀಗೆ ಮಾಡಿದೆ" ಎಂದು ಉತ್ತರಿಸಿದ.

ಅವನ ಜಾಣತನದ ಉತ್ತರವನ್ನು ಕೇಳಿ ಕಾಳಿಕಾ ಮಾತೆಯು ಕೋಪವು ಕರಗಿತು. ಆಗ ಆಕೆಯು "ಎಲೈ ರಾಮಕೃಷ್ಣನೇ, ನೀನು ನನ್ನ ಕೃಪೆಯಿಂದ ಮುಂದೆ ಉತ್ತಮ ಸ್ಥಾನದಲ್ಲಿದ್ದು ಸುಖವಡುತ್ತೀಯೆ. ಆದರೆ ನೀನು ನನ್ನ ಆದೇಶವನ್ನು ಮೀರಿದ್ದಕ್ಕೆ ವಿಕಟ ಬುದ್ಧಿಯವನೂ ಆಗಿರುತ್ತೀಯೆ" ಎಂದು ಹೇಳಿ ಮಾಯವಾದಳು. ಮುಂದೆ ರಾಮಕೃಷ್ಣನು ವಿಜಯನಗರದ ಶ್ರೀಕೃಷ್ಣದೇವರಾಯನ ಆಸ್ಥಾನದಲ್ಲಿ ಸೇರಿಕೊಂಡು ವಿಕಟಕವಿಯಾಗಿ ಪ್ರಸಿದ್ಧಿಯಾದನು.

ಪ್ರಶ್ನೆಗಳು:

1. ರಾಮಕೃಷ್ಣನು -----ಪ್ರಸಿದ್ಧಿಗೆ ಬಂದನು.

A) ಅರಸನಾಗಿ B) ನಾಟಕಕಾರನಾಗಿ C) ವಿಕಟಕವಿಯಾಗಿ D) ಲೇಖಕನಾಗಿ

2. ದೇವಿಯು _____ ಬಟ್ಟೆಗಳನ್ನು ಹಿಡಿದಿದ್ದಳು.

A) ಹಾಲು-ಜೇನು B) ಹಾಲು- ಮೊಸರು C) ಮೊಸರು-ತುಪ್ಪು D) ಸಕ್ಕರೆ- ತುಪ್ಪು

3. ರಾಮಕೃಷ್ಣನು ----- ಆಸ್ಥಾನದಲ್ಲಿದ್ದನು.

- A) ಕೃಷ್ಣರಾಜ ಒಡೆಯರ
B) ಮಯೂರವರ್ಮನ
C) ವಿಕೃಮಾದಿತ್ಯನ
D) ಶ್ರೀ ಕೃಷ್ಣದೇವರಾಯರ

4. ದೇವಿಯು ಕೋಪಗೊಳ್ಳಲು ಕಾರಣ ರಾಮಕೃಷ್ಣನು-----

- A) ಅವಳ ಆದೇಶವನ್ನು ಮೀರಿದ್ದು
B) ಅವಳನ್ನು ರೇಗಿಸಿದ್ದು
C) ಅವಳಿಗೆ ಕೊಟ್ಟ ಉತ್ತರ
D) ಅವಳ ಮಂತ್ರವನ್ನು ಪಠಿಸಿದ್ದು

5. ಮನುಷ್ಯ ಲೋಕದಲ್ಲಿ ನಮ್ಮದಿಯಿಂದ ಬಾಳಬೇಕಾದರೆ -----ಬೇಕಾಗುತ್ತದೆ ಎಂದು ರಾಮಕೃಷ್ಣನು ಹೇಳಿದನು.

- A) ಹಣ- ಆಸ್ತಿ
B) ಆರೋಗ್ಯ- ಹಣ
C) ಪಾಂಡಿತ್ಯ- ಹಣ
D) ಧೈರ್ಯ- ಸಂಪತ್ತು

III. ಕೆಳಗೆ ಕೊಟ್ಟಿರುವ ಎನ್.ಎಸ್.ಲಕ್ಷ್ಮೀನಾರಾಯಣ ಭಟ್ಟರವರ 'ಸಾರ್ಥಕ ಬದುಕಿನ ಸಾಧಕ' ಎಂಬ ಪರಿತ ಗದ್ಯಭಾಗವನ್ನು ಓದಿಕೊಂಡು, ಅದರ ಕೆಳಗೆ ಕೊಟ್ಟಿರುವ ಪ್ರಶ್ನೆಗಳಿಗೆ ಉತ್ತರಿಸಿ.

1x5=5

ಡಿವಿಜಿ ಅವರ ಹುಟ್ಟೂರು ಕೋಲಾರ ಜಿಲ್ಲೆಗೆ ಸೇರಿದ ಮುಳಬಾಗಿಲು. ಅವರದು ವೇದ ಶಾಸ್ತ್ರ ಸಂಪನ್ನರಾದ ಹಿರಿಯರಿದ್ದ ಕುಟುಂಬ. ಅವರ ತಂದೆ ವೆಂಕಟರಮಣಯ್ಯ, ತಾಯಿ ಅಲಮೇಲಮ್ಮ. ಡಿವಿಜಿ ಅವರ ಮನಸ್ಸಿನ ಮೇಲೆ ಪ್ರಭಾವ ಬೀರಿದ ವ್ಯಕ್ತಿಗಳು ಇಬ್ಬರು. ಒಬ್ಬರು ಅವರ ಅಜ್ಜಿ, ಎಂದರೆ ತಾಯಿಯ ತಾಯಿ ಸಾಕಮ್ಮ. ಮಹರ್ಷಿಪ್ರಾಯರಾದ ಚೇತನ ಎಂದು ಡಿವಿಜಿ ಅವರನ್ನು ವರ್ಣಿಸಿದ್ದಾರೆ. ಇನ್ನೊಬ್ಬರು ಅವರ ಸೋದರಮಾವ ತಿಮ್ಮಪ್ಪ. ಪ್ರಸಿದ್ಧ ಕೃತಿಯಾದ ಮಂಕುತಿಮ್ಮನ ಕಗ್ಗದಲ್ಲಿ ತಿಮ್ಮ ಅವರ ಹೃದಯಸ್ವರ್ಣಿಯಾದ ಚಿತ್ರಣವಿದೆ. ಆ ಚಿತ್ರಣಕ್ಕೆ ಆಧಾರವಾದ ವ್ಯಕ್ತಿತ್ವ ಈ ತಿಮ್ಮಪ್ಪನವರದೇ.

ಡಿವಿಜಿ ಮುಳಬಾಗಿಲಿನ ಆಂಗ್ಲೋ ವರ್ನಾಕುಲರ್ ಶಾಲೆಯಲ್ಲಿ ಲೋವರ್ ಸೆಕೆಂಡರಿ ಶಿಕ್ಷಣವನ್ನು ಪೂರ್ಣಗೊಳಿಸಿದರು. ಮುಂದಿನ ಓದಿಗೆ ಬೇರೆ ಊರಿಗೇ ಹೋಗಬೇಕು; ಆದರೆ ಹಣದ ಅನುಕೂಲವಿಲ್ಲ. ಓದು ಇಲ್ಲಿಗೆ ಸಾಕು ಎಂದು ತಂದೆ, ಅಜ್ಜಿ ತೀರ್ಮಾನಿಸಿದರು. ಆದರೆ ಡಿವಿಜಿ ಅವರ ಭಾಗ್ಯ ಎಂಬಂತೆ ಅವರ ಸಹಾಯಕ್ಕೆ ಬಂದವನು ರಸೂಲ್ ಖಾನ್. ಆತನೊಬ್ಬ ಬಂಡಿ ಹೊಡೆಯುವ ವ್ಯಕ್ತಿ. ಬಡವ, ಪ್ರಾಮಾಣಿಕ. ಡಿವಿಜಿಯವರ ತಂದೆಗೆ ಬೇಕಾಗಿದ್ದವನು. "ಗುಂಡಣ್ಣ ತುಂಬ ಚುರುಕಾದ ಹುಡುಗ. ಅವನು ಮುಂದೆ ಓದಲೇಬೇಕು", ಅಂತ ರಸೂಲ್ ಖಾನ್ ಹಟ ಹಿಡಿದು ಬಿಟ್ಟ. "ನೀವೆಲ್ಲ ಏನಾದರೂ ಹೇಳಿ. ಅವನನ್ನು ನನ್ನ ಬಂಡಿಯಲ್ಲಿ ಕೂರಿಸಿಕೊಂಡು ಬೌರಿಂಗ್ ಪೇಟೆ (ಬಂಗಾರಪೇಟೆ)ಗೆ ಹೋಗ್ತೀನಿ. ಬೆಂಗಳೂರಿನ ರೈಲಿನಲ್ಲಿ ಕೂರಿಸಿ ಟಿಕೆಟ್ ಕೊಡಿಸಿ, ಒಂದು ರೂಪಾಯಿ ಕೈ ಖರ್ಚಿಗೆ ಕೊಟ್ಟುಬಿಡ್ತೀನಿ. ಅವನ ಓದು ಮಾತ್ರ ನಡೆಲೇಬೇಕು". ರಸೂಲ್ ಖಾನ್ ನ ಈ ನಿರ್ಧಾರ ಎಲ್ಲರನ್ನೂ ದಂಗುಬಡಿಸಿತು. ಎಲ್ಲ ಅವನು ಹೇಳಿದಂತೆಯೇ ನಡೆಯಿತು. ಡಿವಿಜಿ ಬೆಂಗಳೂರನ್ನು ಕಂಡದ್ದು ಹೀಗೆ ರಸೂಲ್ ಖಾನ್ ನ ದಯೆಯಿಂದ.

ಪ್ರಶ್ನೆಗಳು:

1. ಡಿವಿಜಿ ಅವರ ಮನಸ್ಸಿನ ಮೇಲೆ ಪ್ರಭಾವ ಬೀರಿದ ಆ ಇಬ್ಬರು ವ್ಯಕ್ತಿಗಳ ಹೆಸರು ತಿಳಿಸಿ.
2. ಡಿವಿಜಿ ಅವರನ್ನು ವಿದ್ಯಾಭ್ಯಾಸಕ್ಕಾಗಿ ಬೆಂಗಳೂರಿಗೆ ಕಳುಹಿಸಿದವರು ಯಾರು?
3. ಮುಳಬಾಗಿಲು ಯಾವ ಜಿಲ್ಲೆಗೆ ಸೇರಿದೆ?
4. ಡಿವಿಜಿಯವರ ಪ್ರಸಿದ್ಧ ಕೃತಿ ಯಾವುದು?
5. ಡಿವಿಜಿಯವರು ಲೋವರ್ ಸೆಕೆಂಡರಿ ಶಿಕ್ಷಣವನ್ನು ಪಡೆದ ಶಾಲೆಯ ಹೆಸರೇನು?

IV ಕೆಳಗೆ ಕೊಟ್ಟಿರುವ 'ವಚನಾಮೃತ' ಎಂಬ ಪಠಿತ ಪದ್ಯಭಾಗವನ್ನು ಓದಿಕೊಂಡು, ಅದರ ಕೆಳಗೆ ಕೊಟ್ಟಿರುವ ಪ್ರಶ್ನೆಗಳಿಗೆ ಉತ್ತರಿಸಿ. 1x5=5

ಕೃತಯುಗದಲ್ಲಿ ಶ್ರೀ ಗುರು ಶಿಷ್ಯಂಗೆ ಬಡಿದು ಬುದ್ಧಿಯ
ಕಲಿಸಿದರೆ, ಆಗಲಿ ಮಹಾ ಪ್ರಸಾದವೆಂದನಯ್ಯ;
ತ್ರೇತಾಯುಗದಲ್ಲಿ ಶ್ರೀ ಗುರು ಶಿಷ್ಯಂಗೆ ಬೈದು ಬುದ್ಧಿಯ
ಕಲಿಸಿದರೆ, ಆಗಲಿ ಮಹಾಪ್ರಸಾದ ವೆಂದೆನಯ್ಯ;
ದ್ವಾಪರಯುಗದಲ್ಲಿ ಶ್ರೀಗುರುವು ಶಿಷ್ಯಂಗೆ ಝಂಕಿಸಿ ಬುದ್ಧಿಯ
ಕಲಿಸಿದರೆ, ಆಗಲಿ ಮಹಾಪ್ರಸಾದವೆಂದೆನಯ್ಯ;
ಕಲಿಯುಗದಲ್ಲಿ ಶ್ರೀ ಗುರು ಶಿಷ್ಯನಿಗೆ ವಂದಿಸಿ ಬುದ್ಧಿಯ
ಕಲಿಸಿದರೆ, ಆಗಲಿ ಮಹಾಪ್ರಸಾದವೆಂದೆನಯ್ಯ;
ಗುಹೇಶ್ವರ, ನಿಮ್ಮ ಕಾಲದ ಕಟ್ಟಳೆಯ ಕಲಿತನಕ್ಕೆ ನಾ ಬೆರಗಾದೆನು.
-ಅಲ್ಲಮ ಪ್ರಭು

ಕಾಯಕದಲ್ಲಿ ನಿರತನಾಡೆ
ಗುರುದರ್ಶನವಾದಡೂ ಮರೆಯಬೇಕು;
ಲಿಂಗಪೂಜೆಯಾದಡೂ ಮರೆಯಬೇಕು
ಜಂಗಮ ಮುಂದೆ ನಿಂತಿದ್ದಡೂ ಹಂಗ ಹರಿಯಬೇಕು
ಕಾಯಕವೇ ಕೈಲಾಸವಾದ ಕಾರಣ
ಅಮರೇಶ್ವರ ಲಿಂಗವಾಯಿತ್ತಾದಡೂ ಕಾಯಕದೊಳಗು
-ಆಯ್ತಕ್ಕಿ ಮಾರಯ್ಯ

ಕಾಗೆಯಮರಿ ಕೋಗಿಲೆಯಾಗಬಲ್ಲದೆ?
ಆಡಿನಮರಿ ಆನೆಯಾಗಬಲ್ಲದೆ?
ಸೀಳ(ಳು) ನಾಯಿ ಸಿಂಹದ ಮರಿಯಾಗಬಲ್ಲದೆ?
ಅರಿವು ಆಚಾರ ಸಮ್ಯಜ್ಞಾನವನರಿಯದೆ
ನಾಮವ ಹೊತ್ತುಕೊಂಡು ತಿರುಗುವ ಗಾವಿಲರ
ಮುಖವ ನೋಡಲಾಗದು ಅಮುಗೇಶ್ವರಾ.
-ಅಮುಗೆರಾಯಮ್ಮ

ಪ್ರಶ್ನೆಗಳು:

1. ದ್ವಾಪರಯುಗದಲ್ಲಿ ಶ್ರೀ ಗುರುವು ಶಿಷ್ಯನಿಗೆ ಹೇಗೆ ಬುದ್ಧಿ ಕಲಿಸುತ್ತಿದ್ದರು?
2. ಆಡಿನಮರಿ ಏನಾಗಲು ಸಾಧ್ಯವಿಲ್ಲ?
3. ಆಯ್ತಕ್ಕಿ ಮಾರಯ್ಯನ ಪ್ರಕಾರ ಕೈಲಾಸ ಯಾವುದು?
4. ಯಾರ ಮುಖವನ್ನು ನೋಡಲಾಗದು?
5. 'ಗುಹೇಶ್ವರ' ಎಂಬುದು ಯಾರ ಅಂಕಿತನಾಮವಾಗಿದೆ?

SECTION - B

(ಅನ್ವಯಿಕ ವ್ಯಾಕರಣ ಮತ್ತು ಪಠ್ಯಪೂರಕ ಅಧ್ಯಯನ) = 20 ಅಂಕಗಳು

V. ಕೆಳಗಿನ ಪ್ರತಿಯೊಂದು ಪ್ರಶ್ನೆಗೂ ನಾಲ್ಕು ಉತ್ತರಗಳನ್ನು ಕೊಡಲಾಗಿದೆ. ಅವುಗಳಲ್ಲಿ ಸರಿಯಾದ ಪದವನ್ನು ಆರಿಸಿ ಬರೆಯಿರಿ.

1x10=10

1. ಕೆಳಗೆ ಕೊಟ್ಟಿರುವ ಸಂಧಿ - ಸಂಧಿ ಪದಗಳನ್ನು ಹೊಂದಿಸಿ ಬರೆಯಿರಿ.

- | | |
|---------------|-----------------------|
| a. ಮಂತ್ರೋಪದೇಶ | ೧. ಆದೇಶ ಸಂಧಿ |
| b. ಎಳೆಗರು | ೨. ಜಸ್ತು ಸಂಧಿ |
| c. ಚಕ್ರಾಧಿಪತಿ | ೩. ಗುಣ ಸಂಧಿ |
| d. ಸದ್ಭರ್ಮ | ೪. ಸರ್ವರ್ಥ ದೀರ್ಘ ಸಂಧಿ |

- A) a-೪, b-೨, c-೧ d-೩
 B) a-೧, b-೩, c-೨ d-೪
 C) a-೩, b-೧, c-೪, d-೨
 D) a-೨, b-೪, c-೧, d-೩

2. 'ದೂರ' ಈ ಪದದ ನಾನಾರ್ಥ- ----

- A) ಅರಸ - ದ್ವಾರ B) ರಾಜ - ಸಿಗುವುದು C) ಸಿಗು- ದೂರಕು D) ಒಡೆಯ - ಇರುವಿಕೆ

3. 'ಹುಡುಗನಿಂದ' ಈ ಪದವು ತೃತೀಯ ವಿಭಕ್ತಿಯಾದರ 'ರಾಮನ' ಪದವು ಈ ವಿಭಕ್ತಿಯಾಗಿದೆ.

- A) ಪ್ರಥಮಾ B) ದ್ವಿತೀಯಾ C) ಚತುರ್ಥಿ D) ಪಂಚಿ

4. ಶಾಲೆ, ಪರ್ವತ - ಪದಗಳು ಈ ನಾಮ ವಾಚಕಕ್ಕೆ ಸೇರಿದೆ.

- A) ರೂಢನಾಮ B) ಅಂಕಿತನಾಮ C) ಅನ್ವರ್ಥನಾಮ D) ಸರ್ವನಾಮ

5. 'ಬಾವಸ್ಯ' ಈ ಪದದ ಸಮಾನಾರ್ಥಕ ಪದವಿದು:

- A) ಮೃಷ್ಯಾನ್ವ B) ಸುಗಂಧ C) ಶ್ರೀಗಂಧ D) ಭಕ್ತ- ಭೋಜನ

6. 'ಅಚಾರ - ವಿಚಾರ' ಈ ಪದವು ಯಾವ ವ್ಯಾಕರಣಾಂಶಕ್ಕೆ ಉದಾಹರಣೆಯಾಗಿದೆ.

- A) ದ್ವಿರುಕ್ತಿ B) ಸುಡಿಗಟ್ಟು C) ಜೋಡಿಪದ D) ಅನುಕರಣಾವ್ಯಯ

7. 'ದಯೆ' - ಈ ಪದದ ವಿರುದ್ಧ ಪದವಿದು:

- A) ಸಹೃದಯ B) ದುರ್ದಯ C) ನಿರ್ದಯ D) ಅದಯೆ

8. ಕೆಳಗೆ ಕೊಟ್ಟಿರುವ ತತ್ಸಮ - ತದ್ಭವಗಳ ಸರಿಯಾದ ರೂಪವನ್ನು ಗುರುತಿಸಿ:

- | | |
|--------------------|------------------|
| a. ವಿದ್ಯೆ - ಬಿಡ್ಡೆ | b. ಕಾರ್ಯ - ಕಟ್ಟು |
| c. ಪ್ರಸಾದ - ಹಸಾದ | d. ಭೂಮಿ - ಭೂವಿ |

- A) a ಮತ್ತು c B) b ಮತ್ತು d C) c ಮತ್ತು b D) a ಮತ್ತು d

9. ಬೇಡುತ್ಪಾಳೆ - ಈ ಪದದ ಧಾತು ರೂಪ:

- A) ಬೇಡ B) ಬೇಡು C) ಬೇಡಿ D) ಬೇಡುತ್ಪಾ

10. ಈ ಕೆಳಗಿನ ಪದಗಳಲ್ಲಿ ಗುಂಪಿಗೆ ಸೇರದ ಪದವನ್ನು ಗುರುತಿಸಿ.

- A) ಈಗಿಗ B) ಹೊಹೊದು C) ಮತ್ತೊಮ್ಮೆ D) ಅಲ್ಲಲ್ಲಿ

VI. ಕೆಳಗಿನವುಗಳನ್ನು ಸೂಚನೆಯಂತೆ ಬರೆಯಿರಿ.

1x5=5

1. ಮನೆಯ ಮುಂದೆ ರಂಗೋಲಿ ಹಾಕುತ್ತಾರೆ (ಈ ವಾಕ್ಯವನ್ನು ಭವಿಷ್ಯತ್ಕಾಲದಲ್ಲಿ ಬರೆಯಿರಿ)

3. ಅನುಭವ, ಕಾಲಿಯು ಪರ್ಯಾಯ ಭಂಗಾಂಶರೂಪದಲ್ಲಿ ಅಲ್ಪಭೇದ (ಸೂಕ್ಷ್ಮ ಅನುಭವ ಭೇದಗಳನ್ನು) ಬೀಜಿಸಿ ಬೀಜಿಸಿ

3. ಅಪತ್ಯದ ಅದವನೇ ನೆಂಟೆ (ಈ ಗುಣದ ಮೂಲಕ ಅಧಿಕ ಮಟ್ಟ, ಬೀಜಿಸಿ)

4. ಮನಿ ಕೆಲಸ (ಈ ಮೂಲಕ ಬೀಜಿಸಿ ಸ್ವಲ್ಪ ಅಧಿಕ ಮಟ್ಟ)

5. ಅಧಿಕವು ವಿಶ್ವ ಪರಿವರ ದಿನಾಂಕರಣೆಯಿಂದ ಭಾವಿಸುವ ಮೂಲಕವೂ. (ಈ ಮೂಲಕ ಬೀಜಿಸಿ) ಕರ್ತು ಮತ್ತು ಕ್ರಿಯಾಪ್ರಕಾರವನ್ನು ಗುರುತಿಸಿ

VII. ಕೆಳಗಿನ ಪ್ರತಿಯೊಂದು ಪ್ರಶ್ನೆಗೂ ನಾಲ್ಕು ಉತ್ತರಗಳನ್ನು ಕೊಡಲಾಗಿದೆ. ಅಪುಗಳಲ್ಲಿ ಸರಿಯಾದ ಫಲವನ್ನು ಆರಿಸಿ ಬರೆಯಿರಿ. 1x5=5

1. ಕೆಡೆನುಡುವ, ಕೆಡೆ ಬೀಜ ಕೆಡೆನು ಬೀಜಿಗೆ ಕೆಲವು ಇದನ್ನು ಕೊಡುವಂತಿಲ್ಲವೆಂದು:
 - A) ಮೇಲೆಯವನು
 - B) ಶಿಕ್ಷೆಯನ್ನು
 - C) ಕೂಟವು
 - D) ಭೇದಭಾವವನ್ನು
2. ಸೂಕ್ಷ್ಮ ಕೆ ಪದ್ಯದಿಂದ ನಾವು ಈ ಗುಣವನ್ನು ಕಲ್ಪಿಸುತ್ತೇವೆ:
 - A) ಸೂಕ್ಷ್ಮವನ್ನು
 - B) ಪ್ರಾಮಾಣಿಕತೆಯನ್ನು
 - C) ಪರಿಶೋಧಕರನ್ನು
 - D) ಸತ್ಯತೆಯನ್ನು
3. ಎರಡನೇ ತಾಯಿಯ ಹೆಸರು:
 - A) ಕೂಟವು (ಕೆ)
 - B) ಕೂಟವು (ಕೆ)
 - C) ಕೆಕೂಟ (ಕೆ)
 - D) ಕೆಕೂಟ (ಕೆ)
4. ಮೆಟ್ರಿಕ್ ತಂದೆ- ತಾಯಿ:
 - A) ಮೆಟ್ರಿಕ್ - ಲಕ್ಷ್ಮಿ
 - B) ಪರಮೇಶ್ವರ - ಶಾಂತಿ
 - C) ಬ್ರಹ್ಮ - ಸರಸ್ವತಿ
 - D) ಶಿವ - ಶಾರದೆ
5. ಲೇಖಕರು ಬೆಂಗಳೂರಿನಲ್ಲಿ ಉಳಿದುಕೊಳ್ಳುತ್ತಿದ್ದುದು ಇಲ್ಲಿ:
 - A) ನ್ಯಾಷನಲ್ ಕಾಲೇಜಿನ ಹಿಂಬದಿಯಲ್ಲಿ
 - B) ನ್ಯಾಷನಲ್ ಇನ್ಸ್ಟಿಟ್ಯೂಟ್ ನಲ್ಲಿ
 - C) ನ್ಯಾಷನಲ್ ಕಾಲೇಜಿನ ಹಾಸ್ಟೆಲಿನಲ್ಲಿ
 - D) ನ್ಯಾಷನಲ್ ಹೈವೇ ಬಳಿ

ಭಾಗ-B (40 ಅಂಕಗಳು)

SECTION - C

ಬರವಣಿಗೆ ಕೌಶಲ್ಯ (12 ಅಂಕಗಳು)

VIII. ಸುಳಿವು ಪದಗಳಿಂದ ಗದ್ಯಭಾಗವನ್ನು ಪೂರ್ಣಗೊಳಿಸಿ. 1/2 x8=4

(ಸುಳಿವು ಪದಗಳು : ಅಗತ್ಯವಿರುವವರಿಗೆ ,ಬರ್ಚು, ಅಪ್ಪನು, ಆಹಾರ ,ನಾಳೆಗಾಗಿ, ಪುಸ್ತಕಗಳನ್ನು ,ಸಹಾಯ ,ಅಭ್ಯಾಸ)

ಉಳಿತಾಯ ಮಾಡುವುದು ಒಳ್ಳೆಯ ಅಭ್ಯಾಸ. ಉಳಿತಾಯ ಎಂದರೆ ಎಷ್ಟು ಬೇಕೋ ----- ಬಳಸಿ, ಉಳಿದುದನ್ನು -----ಇಡುವುದು ಎಂದರ್ಥ. ಅದು ಹಣ ಮಾತ್ರವೇ ಅಲ್ಲ, ನೀರು, ----- ಪದಾರ್ಥಗಳು, ಕರೆಂಟು ಮುಂತಾದವು. ಅಪ್ಪ - ಅಮ್ಮ, ಮನೆಗೆ ಬಂದ ನೆಂಟರು ಕೊಡುವ ಹಣವನ್ನು ಅಗತ್ಯವಿಲ್ಲದೆ -----ಮಾಡುವ ಬದಲು ಉಳಿಸಿ ಅದರಿಂದ ಅಗತ್ಯವಿರುವ ಒಳ್ಳೆಯ ವಸ್ತುಗಳನ್ನು ಕೊಳ್ಳಬಹುದು .ಏಕೆಂದರೆ ಪ್ರತಿಯೊಂದು ರೂಪಾಯಿಗೂ ಬೆಲೆ ಇರುತ್ತದೆ. ಮಕ್ಕಳು ಶಾಲೆಯ ----- ಹರಿದು ಅಥವಾ ಗೀಚಿ ಹಾಳು ಮಾಡುತ್ತಾರೆ. ಅಲ್ಲದೆ ಪೆನ್ನು, ಪೆನ್ಸಿಲ್ ಗಳನ್ನು ಮುರಿದು ಹಾಳು ಮಾಡುತ್ತಾರೆ. ಆದರೆ ಇದು ಕಟ್ಟಿ ----- ಹೀಗೆ ಮಾಡದೆ ನಾವು ಯಾವುದೇ ವಸ್ತುವನ್ನು ಅಗತ್ಯವಿರುವಷ್ಟು ಮಾತ್ರ ಬಳಸಿ ಉಳಿದುದನ್ನು ----- ಕೊಟ್ಟರೆ ಬೇರೆಯವರಿಗೆ -- ----- ಮಾಡಿದಂತಾಗುತ್ತದೆ.

IX. ನೀವು ಮಾಡಿಕೊಂಡ ಪರಿಣಾಮ ಸಿದ್ಧತೆಯನ್ನು ಕುರಿತು ನಿಮ್ಮ ತಂದೆ/ತಾಯಿಗೆ ಒಂದು ಪತ್ರ ಬರೆಯಿರಿ. 4

X. ಕೆಳಗೆ ಕೊಟ್ಟಿರುವ ವಿಷಯಗಳಲ್ಲಿ ಯಾವುದಾದರೂ ಒಂದನ್ನು ಕುರಿತು ಪ್ರಬಂಧ ಬರೆಯಿರಿ. 4

- 1.ಭಾವೈಕ್ಯತೆಯನ್ನು ಮೂಡಿಸುವಲ್ಲಿ ರಾಷ್ಟ್ರೀಯ ಹಬ್ಬಗಳ ಪಾತ್ರ
- 2.ತ್ಯಾಜ್ಯ ವಸ್ತುಗಳ ನಿರ್ವಹಣೆ
- 3.ಕ್ರೀಡೆಗಳ ಮಹತ್ವ

SECTION - D

ಪಠ್ಯಗಳ ಅಧ್ಯಯನ (28 ಅಂಕಗಳು)

XI. ಈ ಕೆಳಗಿನ ಪ್ರಶ್ನೆಗಳಿಗೆ ಎರಡು ವಾಕ್ಯಗಳಲ್ಲಿ ಉತ್ತರಿಸಿ. 2x4=8

- 1.ಭಾರತದಲ್ಲಿ ಇತ್ತೀಚೆಗೆ ಯಾವ ಹುನ್ನಾರ ನಡೆದಿದೆ? ವಿದೇಶಗಳಲ್ಲಿ ನೀರಿಗಿಂತ ಅಗವಾಗಿ ಸಿಗುವುದೇನು?
- 2.ಪರ್ವತ ಹಿಮ ಯಾವ ಎತ್ತರಕ್ಕೆ ಎದ್ದುನಿಂತಿದೆ? ನಮ್ಮ ಧ್ವಜವನ್ನು ಎತ್ತಿ ಹಿಡಿದವರು ಯಾರು?
- 3.ರಾವಣನು ವಟುವನ್ನು ಏಕೆ ಕರೆದನು?
- 4.ಲೇಖಕರಿಗೆ ವಿಮಾನ ಯಾನದ ಬಗ್ಗೆ ಭಯವಿಲ್ಲವೇಕೆ?

XII. ಈ ಕೆಳಗಿನ ಪ್ರಶ್ನೆಗಳಿಗೆ 5-6 ವಾಕ್ಯಗಳಲ್ಲಿ ಉತ್ತರಿಸಿ. 3x2=6

- 1.ಯಶೋಧರೆಯ ವಿಧಿಯ ಬಗ್ಗೆ ರಾಜನು ಏನೆಂದು ಹೇಳಿದನು?
- 2.ಬಡವ ಬಲ್ಲಿದ ನಾಗುವನು ಎಂಬುದಕ್ಕೆ ಕವಿ ನೀಡಿರುವ ನಿದರ್ಶನಗಳಾವುವು?

XIII. ಸಂದರ್ಭ ಸಹಿತ ಸ್ವಾರಸ್ಯವನ್ನು ವಿವರಿಸಿ. 3x2=6

1. "ಬರ್ಬೋರ್ ಗುಡಿ ಸಿಕ್ಕಿತು, ಬರ್ಬೋರ್ ದೇವಾಲಯ ದೊರಕಿತು"

ಅಥವಾ

"ನಿದ್ವೆಯಲ್ಲಿ ಮುಳುಗಲಿನ್ನಾವ ಕನಸಿನ ಮೊಸಳೆ ಹಿಡಿಯುವುದೋ"

- 2."ಖಗ ಮೃಗೋರ ಗಾಳಿಯೋ"

ಅಥವಾ

"ಕುಲಹೀನ ನೀನು ಪ್ರತಿಷ್ಠೆ ಸುಡು ಮತಿಹೀನ ನೀನು"

XIV. ಈ ಕೆಳಗಿನ ಪ್ರಶ್ನೆಗಳಿಗೆ 8-10 ವಾಕ್ಯಗಳಲ್ಲಿ ಉತ್ತರಿಸಿ. 4x1=4

- 1.ರಹೀಮನಿಗೆ ಮಗ್ಗದ ಬಗ್ಗೆ ದ್ವೇಷ ಉಂಟಾಗಲು ಕಾರಣವೇನು?

ಅಥವಾ

ಶತ್ರುಘ್ನಾದ್ಯರನ್ನು ಅರಣ್ಯಕನು ಸತ್ಕರಿಸಿದ ವಿಚಾರದಲ್ಲಿ ಮುದ್ದಣ ಮನೋರಮೆಯರ ಮಧ್ಯೆ ನಡೆದ ಸಂಭಾಷಣೆಯನ್ನು ನಿಮ್ಮ ಮಾತುಗಳಲ್ಲಿ ಬರೆಯಿರಿ.

XV. ಈ ಕೆಳಗಿನ ಪ್ರಶ್ನೆಗಳಿಗೆ 8-10 ವಾಕ್ಯಗಳಲ್ಲಿ ಉತ್ತರಿಸಿ. 4x1=4

1. ಗೆಲೆತನದ ಮಹತ್ವವನ್ನು ಕಣವಿ ಅವರು ಹೇಗೆ ತಿಳಿಸಿದ್ದಾರೆ?

ಅಥವಾ

ಶ್ರೀ ರಾಮನು ನರೆದಲಗ ಮತ್ತು ವಿಹಿಯನ್ನು ಸೆರೆಮನೆಗೆ ಹಾಕಲು ಕಾರಣವೇನು?



SINDHI HIGH SCHOOL, BENGALURU
ANNUAL EXAMINATION (2023-24)
SUBJECT - Hindi

Class: VIII

Date: 21/03/2024

Number of printed sides: 6

Marks: 80

Reading Time: 15 mins

Writing Time: 3 hrs

सामान्य निर्देश-

इस प्रश्न-पत्र में चार खंड हैं-क, ख, ग और घ।

खंड क- अपठित गद्यांश 10 अंक

ख- व्याकरण 20 अंक

पाठ्य पुस्तक 35 अंक

लेखन 15 अंक

सभी प्रश्नों के उत्तर क्रमानुसार लिखिए।

सभी खंडों के सभी प्रश्नों के उत्तर देना अनिवार्य है।

खंड-क

1. निम्नलिखित गद्यांश को पढ़कर सर्वाधिक उपयुक्त उत्तर वाले विकल्प चुनकर लिखिए। 5

बातचीत करते समय हमें शब्दों के चयन पर विशेष ध्यान देना चाहिए, क्योंकि सम्मानजनक शब्द व्यक्ति को उदात्त एवं महान बनाती है। बातचीत को सुगम एवं प्रभावशाली बनाने के लिए सदैव प्रचलित भाषा का ही प्रयोग करना चाहिए। अत्यंत साहित्यिक एवं क्लिष्ट भाषा के प्रयोग से कहीं ऐसा न हो कि हमारा व्यक्तित्व चोट खा जाए। बातचीत में केवल विचारों का ही आदान-प्रदान नहीं होता, बल्कि व्यक्तित्व का भी आदान-प्रदान होता है। अतः शिक्षक वर्ग को शब्दों का चयन सोच-समझकर करना चाहिए। शिक्षक वास्तव में एक अच्छा अभिनेता होता है, जो अपने व्यक्तित्व, शैली, बोलचाल और हावभाव से विद्यार्थियों का ध्यान अपनी ओर आकर्षित करता है और उन पर अपनी छाप छोड़ता है।

क. शिक्षक क्या होता है?

- (i) राजनेता (ii) साहित्यकार (iii) अभिनेता (iv) लेखक

ख. बातचीत में किस प्रकार की भाषा का प्रयोग करना चाहिए?

- (i) अप्रचलित (ii) प्रचलित (iii) क्लिष्ट (iv) रहस्यमयी

ग. शिक्षक वर्ग को बोलना चाहिए-

- (i) सोच-समझकर (ii) ज्यादा (iii) बिना सोचे-समझे (iv) तुरंत

घ. बातचीत में आदान-प्रदान होता है-

- (i) केवल विचारों का (ii) केवल भाषा का
(iii) केवल व्यक्तित्व का (iv) विचारों एवं व्यक्तित्व का

ड. सम्मानजनक शब्द व्यक्ति को बनाते हैं-

- (i) विरोधी
(iii) समर्थक

- (ii) उद्घात एवं महान
(iv) अनुभवी

दिए गए उपसर्गों
(i) हम

घ. निम्न

II. निम्नलिखित गद्यांश को पढ़कर सर्वाधिक उपयुक्त उत्तर वाले विकल्प चुनकर लिखिए। 5

अब्दुल हमीद ने दर्जा चार के बाद पढ़ना छोड़ दिया और वह खेल-कूद, कुश्ती में ही रमा रहता। किसी तरह सिलाई का काम सीख तो लिया पर उसमें उसका जी नहीं लगता था। वह तो फ़ौज में जाने को उतावला था। फ़ौज में जाने के लिए फुर्तीले बदन की ज़रूरत होती है। इसीलिए कबड्डी और कुश्ती में उसका जी खूब लगता। उसे पहलवानी तो विरासत में मिली थी। उसके पिता और नाना दोनों ही पहलवान थे। वह तड़के ही अखाड़े पर पहुँच जाता। डंड-बैठकी मारता। अखाड़े की मिट्टी बदन पर मलता और दाँव सीखता।

क. अब्दुल हमीद ने कब पढ़ाई छोड़ दी?

- (i) कक्षा तीन के बाद
(iii) कक्षा पाँच के बाद
(ii) कक्षा चार के बाद
(iv) कक्षा सात के बाद

ख. किस काम में उसका मन नहीं लगता था?

- (i) बिनाई के काम में
(iii) सिलाई के काम में
(ii) खेती के काम में
(iv) मिस्त्री के काम में

ग. फ़ौज में जाने के लिए किसकी आवश्यकता होती है?

- (i) आलसी शरीर की
(iii) लंबे शरीर की
(ii) मोटे शरीर की
(iv) फुर्तीले शरीर की

घ. अब्दुल हमीद का मन किसमें लगता था?

- (i) कबड्डी और कुश्ती में
(iii) क्रिकेट और कुश्ती
(ii) कबड्डी और दौड़ में
(iv) खो-खो और कुश्ती

ड. अब्दुल हमीद के कौन से पूर्वज पहलवान थे?

- (i) चाचा-नाना
(iii) पिता-नाना
(ii) दादा-नाना
(iv) चाचा-दादा

खंड-ख

III. क. संधि विच्छेद कीजिए।
पुरोहित

1

ख. संधि कीजिए।

1

- (i) मनः + अनुकूल
(ii) दुः + जन

ग. दिए गए उपसर्गों को जोड़कर एक-एक शब्द बनाइए।

- (i) हम (ii) ना

घ. निम्नलिखित शब्दों से उपसर्ग अलग कीजिए।

- (i) स्वधर्म (ii) बहिष्कार

IV. क. निम्नलिखित शब्द से मूल शब्द तथा प्रत्यय अलग कीजिए।

ज़हरीला

ख. निम्नलिखित प्रत्ययों को जोड़कर एक-एक शब्द बनाइए।

- (i) इत (ii) वती

ग. निम्नलिखित शब्दों के एक-एक पर्यायवाची शब्द लिखिए।

- (i) लक्ष्मी (ii) पत्थर

घ. निम्नलिखित शब्द के दो अनेकार्थी लिखिए।

सारंग

V. क. अनेक शब्दों के लिए एक शब्द दीजिए।

- (i) घूमने-फिरने वाला । (ii) जो साध पड़ता हो।

ख. रेखांकित शब्द के स्थान पर सही भिन्नार्थक शब्द लिखिए।

- (i) हनुमान जी की गुफा बहुत भारी है
(ii) भिखारी कपट पर खड़ा है।

ग. रेखांकित शब्दों को पहचानकर विशेषण का भेद लिखिए।

- (i) कोमल गुधुर स्वर में गाती है। (ii) घुं आम गहँगे है।

घ. निम्नलिखित शब्दों का अंतर अर्थ द्वारा स्पष्ट कीजिए।

आधि . व्याधि

VI. क. अशुद्ध वाक्य को शुद्ध कीजिए।

मेरा पुस्तक खो गया है।

ख. मुहावरे द्वारा वाक्य को पूरा कीजिए।

मोहन की लत्तो-चाप्पो में न आना, वह तो है।

ग. मुहावरों का अर्थ लिखिए।

- 1) मुट्ठी गरम करना 2) बीड़ा उठाना

VII. क. लिंग परिवर्तन कर वाक्य दोबारा लिखिए।

- (i) हंस पानी में तैर रहा है।

ख. वचन बदलकर वाक्य दोबारा लिखिए।

- (i) रामन ने टोपी खरीदी। (ii) बहू खाना बना रही है।

ग. विलोम शब्द लिखिए।

- (i) ठोस (ii) विरोध (iii) विरह (iv) लघु

खंड - ग

VIII. निम्नलिखित पठित पद्यांश को पढ़कर पूछे गए प्रश्नों के सही विकल्प चुनकर लिखिए। 5

आगे चना गुरुमातु दए ते, लए तुम चाबि हमें नहिं दीने।

स्याम कह्यो मुसकाय सुदामा सों, "चोरी की बान में हौ जू प्रवीने॥

पोटरि काँख में चाँपि रहे तुम, खोलत नाहिं सुधा रस भीने।

पाछिलि बानि अजौ न तजो तुम, तैसई भाभी के तंदुल कीन्हे॥

क. चने किसने दिए थे?

- (i) गुरु (ii) गुरुपितृ (iii) गुरुमाता (iv) गुरुभातृ

ख. कृष्ण, सुदामा को किस आदत में निपुण बताते हैं?

- (i) खाने की (ii) चोरी की (iii) सोने की (iv) रोने की

ग. सुदामा पोटली को कहाँ छिपा रहे थे?

- (i) हाथ में (ii) मुँह में (iii) आँख में (iv) काँख में

घ. सुदामा जिस पोटली को छिपा रहे थे, उसमें क्या था?

- (i) चावल (ii) गेहूँ (iii) रोटी (iv) फल

ङ. कृष्ण सुदामा से कैसे बात कर रहे हैं?

- (i) गुस्से से (ii) रोते हुए (iii) मुसकराकर (iv) चिल्लाते हुए

IX. निम्नलिखित पठित गद्यांश को पढ़कर पूछे गए प्रश्नों के सही विकल्प चुनकर लिखिए। 5

मैं आगे बढ़ा ही था कि बेर की झाड़ी पर से मोती-सी एक बूँद मेरे हाथ पर आ पड़ी। मेरे आश्चर्य का ठिकाना न रहा जब मैंने देखा कि ओस की बूँद मेरी कलाई पर से सरककर हथेली पर आ गई। मेरी दृष्टि पड़ते ही वह ठहर गई। झोड़ी देर में मुझे सितार के तारों की-सी झंकार सुनाई देने लगी। मैंने सोचा कि कोई बजा रहा होगा। चारों ओर देखा। कोई नहीं। फिर अनुभव हुआ कि यह स्वर मेरी हथेली से निकल रहा है। ध्यान से देखने पर मालूम हुआ कि बूँद के दो कण हो गए हैं और वे दोनों हिल-हिलकर यह स्वर उत्पन्न कर रहे हैं मानो बोल रहे हों।

क. उपर्युक्त गद्यांश के पाठ तथा लेखक का नाम कौन सा है?

- (i) एक बूँद - रामचंद्र तिवारी (ii) पानी की बूँद - अमरनाथ
(iii) पानी की कहानी - रामचंद्र तिवारी (iv) पानी और कहानी - अमरनाथ

क. सूँद को किसके सम्मान बताया गया है ?

- (i) बेर के (ii) भीती के (iii) औस के (iv) अंगूर के

ख. सूँद क्या पड़ते ही ठहर गई ?

- (i) धूप (ii) चूड़ि (iii) ओले (iv) दृष्टि

घ. लेखक को किस वाद्य के स्वर सुनाई देने लगे ?

- (i) वीणा (ii) शितार (iii) तानपुरा (iv) गिटार

ङ. सूँद के कितने कण हो गए ?

- (i) तीन (ii) चार (iii) दो (iv) सात

X. निम्नलिखित पठित गद्यांश को पढ़कर पूछे गए प्रश्नों के सही विकल्प चुनकर लिखिए। 5

बदलू यह कार्य सदा ही एक मघिए पर बैठकर किया करता था जो बहुत ही पुरानी थी। बगल में ही उसका हुक्का रखा रहता जिसे वह बीच-बीच में पीता रहता। गाँव में मेरा दोपहर का समय अधिकतर बदलू के पास बीतता। वह मुझे 'लला' कहा करता और मेरे पहुँचते ही मेरे लिए तुरंत एक मघिया मँगा देता। मैं घंटों बैठे-बैठे उसे इस प्रकार चूड़ियाँ बनाते देखता रहता। लगभग रोज ही वह चार-छह जोड़े चूड़ियाँ बनाता। पूरा जोड़ा बना लेने पर वह उसे बेलन पर चढ़ाकर कुछ क्षण चुपचाप देखता रहता मानो वह बेलन न होकर किसी नव-वधू की कलाई ही।

क. बदलू मघिए पर बैठकर क्या कार्य करता था ?

- (i) बर्तन बनाना (ii) जूते बनाना (iii) चूड़ियाँ बनाना (iv) हुक्का पीना

ख. गाँव में लेखक का अधिकतर समय कहाँ बीतता था ?

- (i) मामा के घर में (ii) खेल के मैदान में (iii) बगीचे में (iv) बदलू काका के पास

ग. लेखक को बदलू क्या कहकर बुलाता था ?

- (i) लल्ला (ii) लला (iii) लालू (iv) लाल

घ. बदलू लेखक को कहाँ बिठाता था ?

- (i) मघिया पर (ii) चबूतरे पर (iii) चौकी पर (iv) कुर्सी पर

ङ. चूड़ियाँ चढ़ा बेलन बदलू को कैसा लगता था ?

- (i) सोने सा (ii) चमकदार (iii) बहुत सुंदर (iv) वधू की कलाई-सा

XI. पठित पाठों के आधार पर निम्नलिखित प्रश्नों के उत्तर लिखिए।

10

क. पहला बोलता सिनेमा बनाने के लिए फ़िल्मकार अर्देशिर एम. ईरानी को प्रेरणा कहाँ से मिली ?

उन्होंने 'आलम आरा' फ़िल्म के लिए आधार कहाँ से लिया ? विचार व्यक्त कीजिए।

ख. पक्षी और बादल की चिट्ठियों में पेड़-पौधे, पानी और पहाड़ क्या पढ़ पाते हैं ?

ग. 'कामचोर' कहानी क्या संदेश देती है ?

घ. बालक श्री कृष्ण किस लोभ के कारण दूध पीने के लिए तैयार हुए ?

ङ. घायल बाज को देखकर साँप खुश क्यों हुआ होगा ?

XII. निम्नलिखित प्रश्नों के उत्तर लिखिए।

4

- क. अंग्रेज के सामने बिलवासी जी ने झाऊलाल को पहचानने तक से क्यों इंकार कर दिया था? आपके विचार से बिलवासी जी ऐसा अजीब व्यवहार क्यों कर रहे थे? स्पष्ट कीजिए।
- ख. 'तलवार का महत्त्व होता है म्यान का नहीं' - उक्त उदाहरण से कबीर क्या कहना चाहते हैं? स्पष्ट कीजिए।

XIII. निम्नलिखित प्रश्नों के उत्तर लिखिए।

6

- 1) स्वामी दयानंद सरस्वती ने लोगों को क्या संदेश दिया?
- 2) टैगोर का शांति निकेतन क्या था?
- 3) गांधी जी की कथनी और करनी में मेल था। कैसे?

खंड-घ

XIV. निम्नलिखित में से किसी एक विषय पर पत्र लिखिए।

5

नवभारत टाइम्स के संपादक को पत्र लिखकर वर्षा के कारण दिल्ली की सड़कों की दुर्दशा का वर्णन कीजिए।

अथवा

अपने क्षेत्र में बढ़ते अपराधों की सूचना देते हुए जनसत्ता समाचार-पत्र के संपादक को पत्र लिखिए।

XV. दिए गए संकेत बिंदुओं के आधार पर निम्नलिखित में से किसी एक विषय पर 80-100 शब्दों में अनुच्छेद लिखिए।

5

* मधुर वचन है औषधि, कटु वचन है तीर

वाणी एक अनमोल वरदान
मधुर वाणी से हृदय पर विजय
कटु वचनों से हानि
कोई सूक्ति

* सत्संगति

सत्संगति का अर्थ
कुसंगति का परिणाम
सत्संगति का महत्त्व
कोई सूक्ति

XVI. निम्नलिखित विषयों में से किसी एक विषय पर संवाद लेखन लिखिए।

5

बस कंडक्टर और यात्री के बीच संवाद

अथवा

दो सहेलियों रीता और मीता के बीच संवाद



SINDHI HIGH SCHOOL, BENGALURU
ANNUAL EXAMINATION [2023-24]
SUBJECT - SANSKRIT

Name : _____

Roll No: _____

Class/Sec: VIII _____

Date: 28.3.2024

No. of sides: 47

Max. Marks: 30

Reading time: 15 mins

Writing Time: 1 hrs

General Instructions:

- Write your Name, Roll number, Section in the answer script.
- Read all the Questions carefully.
- Answer all the Questions and write neatly.
- खण्ड 'क' - अपठित गद्यांश: - 6
- खण्ड 'ख' - रचनात्मक कार्यम् - 8
- खण्ड 'ग' - अनुप्रयुक्त व्याकरणम् - 10
- खण्ड 'घ' - पठितावबोधनम् - 6

खण्ड 'क' - अपठित गद्यांश:

I. Read the passage and answer the questions given below.

गद्यांशम् पठित्वा अधोदत्तान् प्रश्नान् उत्तरत ।

दिल्लीनगरं यमुनातीरे स्थितम् अस्ति । एतत् महानगरम् अस्ति । एतत् भारतवर्षस्य राजधानी अपि वर्तते । अत्र देशस्य सर्वेभ्यः प्रदेशेभ्यः जनाः आगत्य निवसन्ति । न केवलं भारतस्य अपितु विश्वस्य प्रमुखेषु नगरेषु अपि दिल्लीनगरं गण्यते । अस्मिन् ऐतिहासिके नगरे अनेकानि दर्शनीयानि स्थलानि यथा इन्डिया गेट्, कमल मन्दिरं, जन्तर्मन्तर् रक्तदुर्ग अपि सन्ति । राजघाट्, शक्तिस्थल्, शान्तिवन् इत्यादयः स्मारकाः अपि अत्र सन्ति । अस्य विशालता भव्यता च जनान् आकर्षतः । वैदेशिकाः अपि अस्य नगरस्य सौन्दर्येण मुग्धाः भवन्ति । देशस्य प्रमुखाः नेतारः, राष्ट्रपतिः, प्रधानमन्त्री च अत्र एव वसन्ति ।

A. एकपदेन उत्तरत । Answer in one word.

५ X 2 = 1

१. दिल्लीनगरं कुत्र स्थितम् अस्ति ? _____

२. के अस्य नगरस्य मौन्दर्येण मुग्धाः भवन्ति ? _____

B. पूर्णवाक्येन उत्तरत । Answer in complete sentence.

2 X 2 = 4

१. दिल्लीनगरे के के स्मारकाः सन्ति ?

२. अत्र के के वसन्ति ?

C. यथानिर्देशं उत्तरत । Do as Directed

५ X 2 = 1

१. 'तटे' पदस्य पर्यायपदम् किम् । _____

(नदी, तीरे, वर्तते)

२. 'एतत् भारतवर्षस्य राजधानी अपि वर्तते' । _____

अस्मिन् वाक्ये अव्ययपदम् किम् । (एतत्, अपि, वर्तते)

खण्ड 'ख' - रचनात्मक कार्यम्

II. चित्रम् दृष्ट्वा मञ्जूषायाः पदानि उपयुज्य 4 वाक्यानि रचयत । 1 X 4 = 4

Observe the picture and make 4 sentences with words given in the helpbox.

(पुरुः, छायाः, वृक्षाः, उदजः, पुरुकुलस्य, उपविशन्ति, मन्ति, मान्ति, पठन्ति, पाठयति, शृण्वन्ति)



III. वाक्यानि संस्कृते अनुवादः कुरुत ।

1 X 4 = 4

Translate the sentences into Sanskrit.

1. Two monkeys play. दो बानर खेलते हैं ।

2. Mohan went to school. मोहन विद्यालय गया ।

3. We all laugh. हम सब हसते हैं ।

4. Elephant ate a banana. गज ने केला खाया ।

खण्ड 'ग' - अनुप्रयुक्त व्याकरणम्

IV. Write the number names in Sanskrit.

1 X 4 = 4

संख्यानाम संस्कृतेन लिखत ।

1. १२ _____

2. ४ _____

3. १७ _____

4. ८ _____

V. प्रकृति-प्रत्ययौ योज्य लिखत ।

$\frac{1}{2} \times 4 = 2$

Combine the verbs and suffixes .

1. पठ् + तुमुन् = _____

2. हस् + तुमुन् = _____

3. गम् + तुमुन् = _____

4. पा + तुमुन् = _____

इत्यवधार्यं, कुतोऽपि क्षीरं याचित्वा शरावे निक्षिप्य वाल्मीकान्तिकमुपगत्योवाच - 'भोः
क्षत्रपाल ! मया एतावन्तं कालं न जातं यत्त्वमत्र वससि, तेन पूजा न कृता । तत्साम्प्रतं
क्षमस्व' इति । एवमुक्त्वा दुग्धञ्च निवेद्य गृहाऽभिमुखं प्रायात् ।

A. एकपदेन उत्तरत । Answer in one word.

$\frac{1}{2} \times 2 = 1$

1. ब्राह्मणस्य नाम किम् ?

2. ब्राह्मणः वाल्मीकोपरि कम् दृष्टवान् ?

B. पूर्णवाक्येन उत्तरत । Answer in complete sentence. $2 \times 2 = 4$ 1.

1. ब्राह्मणः किम् चिन्तयामास ?

2. दुग्धम् निवेद्य हरिदत्तः कुत्र प्रायात् ?

VI. सन्धिं योज्य विभज्य वा लिखत ।

Make or split the sandhi and write.

1 X 4 = 4

1. अथैकस्मिन् = _____ + _____

2. तेन + इदम = _____

3. केयम् = _____ + _____

4. शङ्कर + आचार = _____

खण्ड 'घ' - पठितावबोधनम्

VII. गद्यांशम् पठित्वा अधोदत्तान् प्रश्नान् उत्तरत ।

Read the passage and answer the questions given below

अस्ति कस्मिंश्चिदधिष्ठाने हरिदत्तो नाम ब्राह्मणः । तस्य च कृषिं कुर्वतोऽपि समीचीनं फलमलभमानस्य कालोऽतिवर्तते । अथ एकस्मिन् दिवसे स ब्राह्मणः चिन्ताग्रस्तः उष्णकालावसाने घर्मार्तः स्वक्षेत्रमध्ये वृक्षच्छायायां प्रसुप्तोऽनतिदूरे वल्मीकोपरि प्रसारितबृहत्फटाटोप भीषणं भुजङ्गमं दृष्ट्वा चिन्तयामास-नूनमेषा क्षेत्रदेवता मया कदाचिदपि न पूजिता । तेनेदं मे कृषिकर्म विफलीभवति । तदस्य अहं पूजामद्य करिष्यामि ।

2. कर्माभिधीतं उच्यते । Do as directed.

॥ ४ ॥

1. 'विद्' इत्यस्य कर्माभिधीतम् कदापि क्विन्त्वा लिखत ॥ _____

(कर्त्तव्यम्, कर्त्तुम्, कृतम्)

2. 'सर्त्तु' इत्यस्य कर्माभिधीतम् कदापि क्विन्त्वा लिखत ॥ _____

(कृतम्, कर्त्तव्यम्, कर्त्तुम्)



SINDHI HIGH SCHOOL, BENGALURU
Annual Examination- 2023-2024
Subject: Mathematics

Date: 19/03/2024

Class: VIII

No of printed sides: 8

Marks: 80

Time: 3 h

Reading time: 8.00-8.15am

Writing time: 8.15-11.15am

GENERAL INSTRUCTIONS

- Write your name, roll number, class and section, date and subject clearly in your answer script.
- 1. This Question Paper has 5 Sections A-E.
- 2. Section A has 20 MCQs carrying 1 mark each
- 3. Section B has 5 questions carrying 02 marks each.
- 4. Section C has 6 questions carrying 03 marks each.
- 5. Section D has 4 questions carrying of 05 marks.
- 6. Section E has 3 case based integrated units of assessment (04 marks) with subparts of the values of 1, 2 and 1 marks each respectively.
- 7. All Questions are compulsory. However, an internal choice in 2 Qs of 2 marks, 2 Qs of 3 marks and 2 Questions of 5 marks has been provided.
- 8. Draw neat figures wherever required. Take $\pi = 22/7$ wherever required if not stated

SI No	Section A	Marks
1.	The multiplicative inverse of $2\frac{2}{5}$ is a) $\frac{-12}{5}$ b) $\frac{5}{12}$ c) $\frac{12}{5}$ d) $\frac{-5}{12}$	1
2.	The perfect cube number between 50 to 100 is a) 75 b) 90 c) 64 d) 81	1
3.	If x and y are directly proportional, then which of the following is correct? a) $x+y=\text{constant}$ b) $x-y=\text{constant}$ c) $xy=\text{constant}$ d) $x/y=\text{constant}$	1
4.	Which of the following statements is true? a) Natural numbers are closed under multiplication b) Whole numbers are not closed under multiplication c) Integers are not closed under multiplication d) Rational numbers are not closed under multiplication.	1

5.	One number is greater than the other number by 3. The sum of 2 numbers is 23. The 2 numbers are a) 13,10 b) 14,9 c) 12,11 d) 15,8	1
6.	The square of 42 is: a) 1664 b) 1764 c) 1564 d) 1504	1
7.	A die is thrown. What is the probability of getting even prime number? a) $\frac{1}{6}$ b) $\frac{1}{2}$ c) $\frac{1}{3}$ d) $\frac{1}{5}$	1
8.	The volume of a cuboid with length, breadth and height as $5x$, $3x^2$ and $7x^4$ respectively is a) $100x^7$ b) $105x^7$ c) $95x^7$ d) $115x^7$	1
9.	18 out of 36 people love reading, so reading in the pie chart is represented by a) $\frac{1}{4}$ of a circle b) $\frac{1}{2}$ of a circle c) full circle d) semicircle	1
10.	Waheeda bought an air cooler for Rs. 3300 including a tax of 10%. The price of the air cooler before VAT was added is: a) Rs. 2000 b) Rs. 3000 c) Rs. 2500 d) Rs. 2800	1
11.	Divide $(p^3q^6 - p^6q^3)$ by (p^3q^3) a) p^3-q^3 b) q^3-p^3 c) p^3q^3 d) p^6-q^6	1
12.	In Cartesian plane, what is the y - coordinate of a point which lies on the x axis? a) 1 b) Any number c) 0 d) -1	1
13.	Which of the following is not true for a parallelogram? a) Opposite sides are equal b) Opposite angles are equal c) Adjacent angles of a parallelogram are complementary angles d) Diagonals bisect each other.	1
14	A polynomial contains _____ number of terms: a) One b) Two c) Three d) Any	1

15	The value of $(3^4)^3$ is: a) 3 b) 3^{12} c) 3^7 d) 3^8	1
16	On factorising $14pq + 35pqr$, we get: a) $pq(14+35r)$ b) $p(14q+35qr)$ c) $q(14p+35pr)$ d) $7pq(2+5r)$	1
17	The age of the father is three times the age of the son. If the age of the son is 15 years old, then the age of the father is: a) 50 years b) 55 years c) 40 years d) 45 years	1
18	If $(-3)^{m+1} \times (-3)^5 = (-3)^7$, then the value of m is: a) 5 b) 7 c) 1 d) 3	1
	Direction for questions 19 & 20: In question numbers 19 and 20, a statement of Assertion (A) is followed by a statement of Reason (R). Choose the correct option	
19	Assertion (A) –The one’s digit of the cube of the number 12 is 4 Reasons (R) –A cube number is a number multiplied by itself 3 times a) Both A and R are true and R is the correct explanation of A b) Both A and R are true but R is not the correct explanation of A c) A is true but R is false d) A is false but R is true	1
20	Assertion (A)-The common factor of $10ab, 30bc, 50ca$ is 10 Reasons (R) –A common factor is a number that divides each of the different numbers, without leaving a remainder. a) Both A and R are true and R is the correct explanation of A b) Both A and R are true but R is not the correct explanation of A c) A is true but R is false d) A is false but R is true	1
	SECTION- B	
21.	If the height of a trapezium measures 12cm and its parallel sides measures 14cm and 15cm, find its area.	2

22. Solve $(x - 2) - (x - 3) + (x - 3) = 8$ 2


23. If 72% of 25 students like mathematics, find out the number of students who do not like mathematics? 2

OR

A person goes shopping and spends 75% of his money. If he is now left with Rs. 600, find out how much he had in the beginning.

24. Express 4^{-3} as a power with base 2. 2

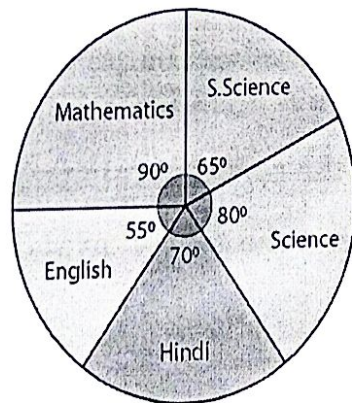
25. A survey was made to find the type of music that a certain group of young people liked in a city. The adjoining pie chart shows the findings of this survey. 2



If 20 people liked classical music, how many young people were surveyed and what angle does it represent in the pie chart?

OR

The adjoining pie chart gives the marks scored in an examination by a student in Hindi, English, Mathematics, Social Science and Science. If the total marks obtained by the students were 540.



How many more marks were obtained by the student in Mathematics than science?

SECTION - C

26. Evaluate

$$\left[\left(\frac{2}{3} \right)^{-3} + \left(\frac{1}{2} \right)^3 \right] \div \left(\frac{1}{3} \right)^{-3}$$

3

27. A car travels 14 km in 25 minutes.

a) Find out how far the car can travel in 5 hours if the speed remains the same?

b) How long did it take for the car to travel 100km.

3

28. Find cube root of 15625 by prime factorization method.

3

29. Factorise: $x^2 - 7x - 18$

3

30. The sum of three consecutive multiples of 11 is 330. Find these numbers.

3

OR

The breadth of a rectangular garden is $\frac{2}{3}$ of its length. If its perimeter is 40 m, find its dimensions.

31. A piece of string is 30 cm long. What will be the length of each side of the string is used to form:

3

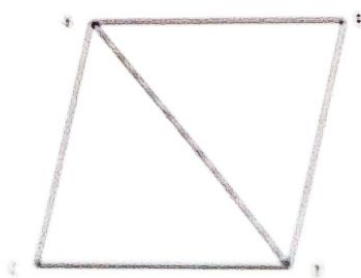
(a) A square?

(b) An equilateral triangle?

(c) A regular pentagon?

OR

If a diagonal and a measure of one side of a rhombus are equal, then find the measure of each angle.



SECTION-D

32. Draw the graphs for the following table of values, with suitable scales on the axes.

5

Interest on deposits for a year.

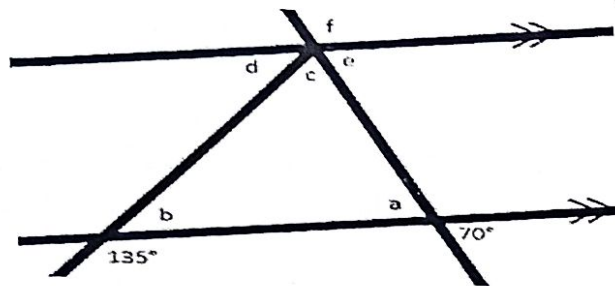
Deposit (in Rs.)	1000	2000	3000	4000	5000
Simple interest (in Rs.)	80	160	240	320	400

(i) Does the graph pass through the origin?

(ii) Use the graph to find the interest on Rs 2500 for a year.

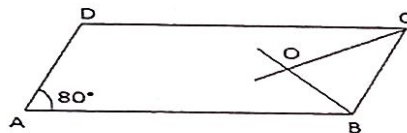
33. Find the value of a,b,c,d,e and f. Mention the properties used to find these angles

5



OR

ABCD is a parallelogram with $\angle A = 80^\circ$. The internal bisectors of $\angle B$ and $\angle C$ meet each other at O. Find the measure of the three angles of $\triangle BCO$.



34. Find the value of $(\sqrt{20164} \div \sqrt{5041}) \times \sqrt{144}$

5

35. Verify the associative property of addition by taking $a = \frac{4}{3}$; $b = \frac{-2}{7}$ and $c = \frac{1}{2}$.

5

OR

Verify the Distributive property of multiplication over addition by taking $a = \frac{4}{3}$; $b = \frac{-2}{7}$ and $c = \frac{1}{2}$.

SECTION-E

36. The discount announced on different android mobiles in a whole sale shop are as follows



1) Mention one of the reasons for which 80% discount is announced to a mobile.

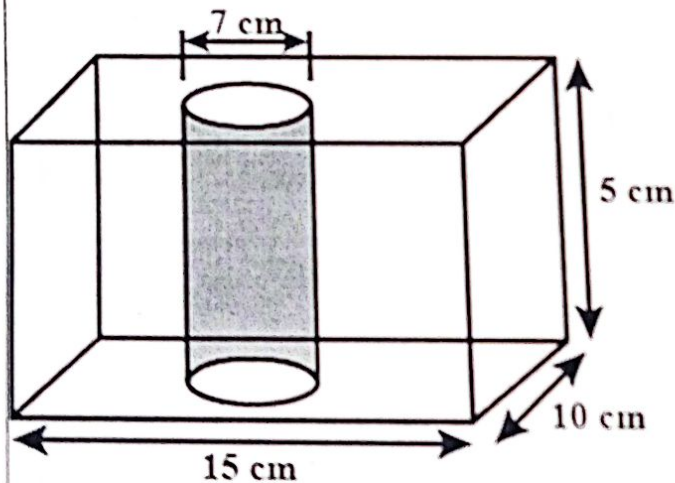
2) If the discount is 40% and the marked price of the mobile is Rs.15000, what is the discount amount?

OR

If a mobile of Rs10000 is sold for Rs9000, what is the discount percent allowed on the mobile?

3) Identify the discount percentage that is listed above is equivalent $\frac{1}{4}$.

37. Rahul has packed a cylindrical juice can inside the cuboidal box as shown in the figure. The height of the can is same as that of the box.



1) If the can is painted around its lateral surface, find its lateral surface area.

2) What is the volume of the juice filled in the can?

OR

What the total surface area of the box?

3) Find the volume of the box.

Keshav's mother gave him Rs. $4x - 15$ and his father gave him Rs. $(3x - 3)$. Out of this total money he spent Rs. $(10 - 2x)$ on his birthday party.

- 1) What is the total amount received by Keshav from his parents?
- 2) Find the total amount paid by both the parents to Keshav, if $x = 2$.
- 3) Find the amount left with him. If $x = 5$, then find the exact amount left with him.

OR

Find the difference between the amounts given by his parents. If $x = 5$, find the exact difference amount.



SINDHI HIGH SCHOOL, BENGALURU
Annual Examination (2023-24)
Subject-Science

Class: VIII
Date: 18 /03 /2024
No. of sides: 12

Max Marks: 80
Reading Time: 8:00-8:15 am
Writing Time: 8:15-11:15 am

General instructions:

- i. This question paper consists of 39 questions.
- ii. All questions are compulsory. However, an internal choice is provided in some questions. A student is expected to attempt only one of these questions.
- iii. Section A consists of 20 objective questions carrying 1 mark each.
- iv. Section B consists of 6 very short questions carrying 2 marks each.
- v. Section C consists of 7 short answer type questions carrying 3 marks each.
- vi. Section D consists of 3 long answer type questions carrying 5 marks each.
- vii. Section E consists of 3 case-based questions carrying 4 marks each.

Sl.no	Section-A	Marks
1	<p>A substance X is obtained from an exhaustible natural resource. It is a black and thick liquid with an unpleasant smell. It is a mixture of 200 substances. Some of the products such as synthetic dyes, plastic paints, explosives, perfumes, etc are obtained using this resource. The substance X is_____</p> <p>(a) Coke (b) Coal tar (c) Bitumen (d) Lubricating oil</p>	1

2	<p>Choose the correct statement about the inflammable substances from the following. They have _____</p> <p>(a) low ignition temperature and cannot catch fire easily</p> <p>(b) high ignition temperature and catch fire easily.</p> <p>(c) low ignition temperature and can catch fire easily.</p> <p>(d) high ignition temperature and cannot catch fire easily.</p>	1
3	<p>PCRA stands for _____</p> <p>(a) Public Conservations Research Association</p> <p>(b) Petroleum Conservation Research Association</p> <p>(c) Public Council of Research Association</p> <p>(d) Partial Counting of remaining Amendment</p>	1
4	<p>A tester is used to check the conduction of electricity through two liquids, A and B. It is found that the tester bulb glows brightly for liquid A and very dimly for liquid B. You would conclude that:</p> <p>(a) liquid A is a better conductor than B.</p> <p>(b) liquid B is a better conductor than A.</p> <p>(c) both liquids are equally conducting.</p> <p>(d) conducting properties of liquid should not be compared in this manner.</p>	1
5	<p>Which of the following is not a constituent of petroleum?</p> <p>(a) Paraffin wax (b) Coke</p> <p>(c) Petrol (d) Lubricating oil</p>	1

6	<p>All noble gases are</p> <p>(a) Monatomic (b) Diatomic</p> <p>(c) Triatomic (d) Both a and b</p>	1
7	<p>A natural gas stored under high pressure is called</p> <p>(a) CNG (b) LPG</p> <p>(c) KLG (d) PNP</p>	1
8	<p>Identify the correct statement(s) from given below.</p> <p>(i) Testes start producing sperm at the age of 21 years.</p> <p>(ii) Ovulation starts at the adolescent age in females.</p> <p>(iii) Beard in boys is a secondary sexual character.</p> <p>(a) All are correct (b) Only iii</p> <p>(c) i and ii (d) ii and iii</p>	1
9	<p>The place where flora and fauna are conserved in the natural habitat is/are</p> <p>(i) Zoological garden (ii) Wildlife sanctuary</p> <p>(iii) Botanical garden (iv) National Park</p> <p>(a) i & ii (b) iii & iii</p> <p>(c) iii & iv (d) iii & iv</p>	1
10	<p>Read the following statements –</p> <p>(i) Streptomycin, Tetracycline and Erythromycin are antibiotics as they kill the same microorganism from which these are produced.</p> <p>(ii) Antibiotics are also used in poultry farms.</p> <p>(iii) Antibiotics are very effective against viral diseases like flu and cold.</p> <p>(iv) Antibiotics produce antibodies to fight against the pathogens</p>	1

Choose the correct statement from the above

- (a) (i) (b) (ii)
(c) (iii) (d) (iv)

11

In a class of 40 students 23 are girls and the remaining are boys. The class has an average of 10- 11 years. Based on this statement find out the correct option from the followings

- | | |
|-----|--|
| i- | Adolescence begins around the age of 11 |
| ii- | In girls, adolescence may begin a year or two earlier than in boys |

- (a) Statement 1 is correct
(b) Statement 2 is correct
(c) Both the statements are correct
(d) Both the statements are incorrect

1

12

Roohi is very curious to know the reason behind the similarity of children with their family members. Select the correct reason from the given options.

- (a) Cells (b) Eggs
(c) Sperms (d) Genes

1

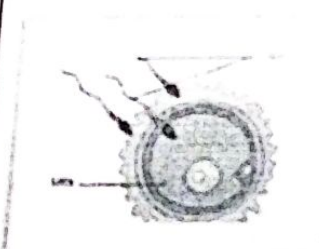

13

The point from where the shock waves of an earthquake originate is called

- (a) epicentre (b) seismic focus
(c) focal depth (d) mantle

1

14	<p>A pendulum oscillates 20 times in 4 seconds. Find its time period.</p> <p>(a) 0.05 sec. (b) 0.001 sec. (c) 0.2 sec. (d) 0.1 sec.</p>	1
15	<p>A student in a village area, observed a few green patches on the boundary wall of his school. He asked his teacher about the green patches. His teacher clarifies the doubt of that student. Now he is able to recognize the group of organisms belonging to the green patches. In your view, green patch is most likely to be _____</p> <p>(a) A type of virus (b) A type of algae (c) A type of fungus (d) A type of bacterium</p>	1
16	<p>Pancreas is responsible for maintaining _____</p> <p>(a) blood pressure (b) fat metabolism (c) blood glucose level (d) electrolyte balance</p>	1
	<p>For question numbers 17 to 20 two statements are given - one labeled Assertion (A) and the other labeled Reason (R). Select the correct answer to these questions from the codes (a), (b), (c), and (d) as given below:</p> <p>a) Both A and R are true, and R is the correct explanation of the assertion.</p> <p>b) Both A and R are true, but R is not the correct explanation of the assertion.</p> <p>c) A is true, but R is false.</p> <p>d) A is false, but R is true.</p>	
17	<p>Assertion: The colour of LPG flame is blue while a candle flame is yellow.</p> <p>Reason: LPG undergoes complete combustion while wax undergoes incomplete combustion.</p>	1

18	<p>Assertion: Endemism is the state of a species being found in a single defined geographic location, such as an island, state, nation, country or other defined zone.</p> <p>Reason: Sal and wild mango are examples of endemic species of Pachmarhi Biosphere Reserve.</p>	1									
19	<p>Assertion: Amoeba reproduces by binary fission.</p> <p>Reason: All unicellular organisms reproduce asexually.</p>	1									
20	<p>Assertion: Lightning strikes could destroy life and property.</p> <p>Reason: Lightning conductors can protect buildings.</p>	1									
Section-B											
21	The atomic numbers of three elements A, B and C are 9, 10 and 13 respectively. Which of them will form a cation? Justify.	2									
22	<p>Which type of reproduction is exhibited by the following diagrams. Write any one difference.</p> <div style="display: flex; justify-content: space-around; align-items: center;">   </div> <p style="text-align: center;">OR</p> <p>At a time, male gametes are produced in an enormous amount in comparison to the female gamete in human females. The number of eggs is limited in human females. Mention the site of production of male and female gametes in the following format</p> <table border="1" data-bbox="183 1668 1117 1892" style="width: 100%; border-collapse: collapse;"> <thead> <tr> <th style="width: 20%;">Gamete</th> <th style="width: 40%;">Name</th> <th style="width: 40%;">Site of production</th> </tr> </thead> <tbody> <tr> <td>Male</td> <td></td> <td></td> </tr> <tr> <td>Female</td> <td></td> <td></td> </tr> </tbody> </table>	Gamete	Name	Site of production	Male			Female			2
Gamete	Name	Site of production									
Male											
Female											
23	From 2001 to 2021, India lost 2.07Mha of tree cover, equivalent to a	2									

1.7% decrease in iron content since 2000. From 2000 to 2021, India lost 24 kha of iron content from forest and 1.01 kha from all other sources of iron. Write the consequences of desertification. (Any four points)

24 Why can a copper rod not be charged by friction if held by hand? 2

25 How many images of the candle will be seen if it is placed between two parallel plane mirrors separated by a distance of 40 cm?
OR
Explain regular reflection with the help of a diagram. 2

26 The following pots labelled as A, B, and C are germinated by using different cultivation methods. 3



Pot A- manure is added

Pot B- Fertilizer is added

Pot C- Neither manure nor fertilizer is added

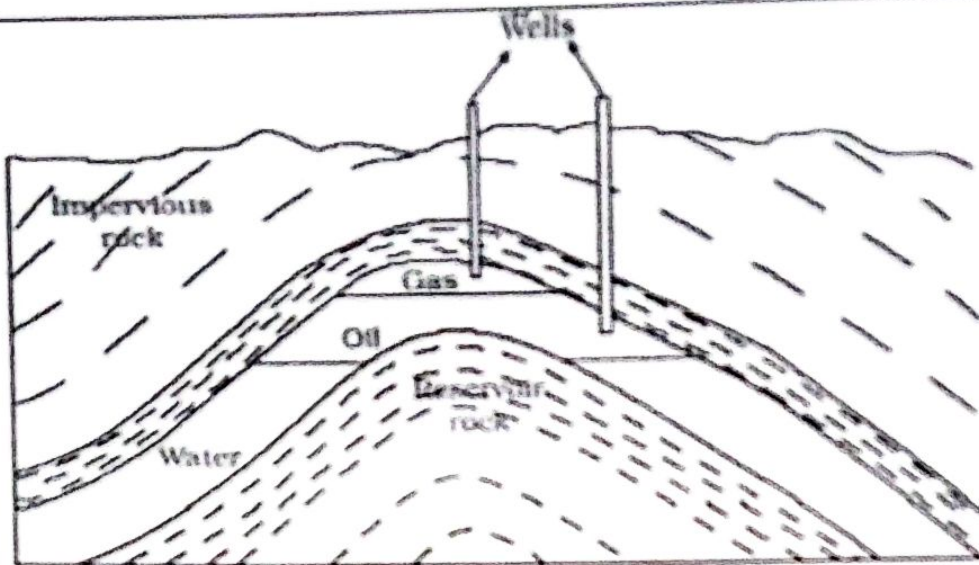
(a) Which one shows the least growth and why?

(b) We should use the product of which pot and why?

Section C

(a) Sunlight and air are inexhaustible natural resources. Comment.

(b) Look at the Fig given below where petroleum and natural gas deposits are shown. Why do we find oil layer above water layer?



3

(c) Name two places in India where coal is found.

28

(a) Write the chemical formulae of the following using the criss-cross method.

- (i) Copper nitrate
- (ii) Calcium carbonate
- (iii) Magnesium hydroxide

OR

Balance the equations given below

- (a) $\text{HNO}_3 + \text{Ca}(\text{OH})_2 \rightarrow \text{Ca}(\text{NO}_3)_2 + \text{H}_2\text{O}$
- (b) $\text{Zn} + \text{HCl} \rightarrow \text{ZnCl}_2 + \text{H}_2$
- (c) $\text{BaCl}_2 + \text{H}_2\text{SO}_4 \rightarrow \text{BaSO}_4 + \text{HCl}$

3

29

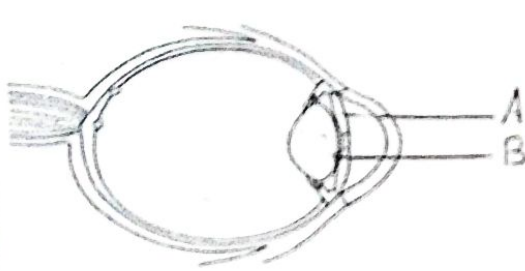

- (a) Though hen and frog both are oviparous but they have different types of fertilization. Justify.
- (b) Write a short note on foetus.

3

30

- (a) We know that vibration is necessary for producing sound, so why can't we hear the sound produced by every vibrating body?
- (b) Lightning and thunder happen in the sky simultaneously and at the same distance from us. Then why do we first see the flash of lightning and then, after some time we hear the thunder sound?

3

31	<p>(a) The angle between the ray of incidence and the reflected ray is 60°. What is the angle of incidence?</p> <p>(b) Label A and B and write their role.</p> 	3
32	<p>(a) Beera, wants to practice crop rotation in his field. Suggest a Rabi crop and a Kharif crop which will replenish his field with nitrogen. Which crop replenishes nitrogen and why?</p> <p>(b) Despite favourable climatic conditions, a farmer's crop failed to give a good yield. Give the possible reasons for this.</p>	3
33	 <p>(a) What will you observe in Figure-I?</p> <p>(b) What will you observe in Figure-II?</p> <p>(c) Is it true that a charged object always attracts an uncharged object but it may or may not attract another charged object?</p>	3
Section-D		
34	<p>(a) If a small amount of sugar is added to distilled water, will the resulting solution be a good conductor or a poor conductor of electricity? Explain why.</p> <p>(b) An electric current is passed into a conducting solution. What can be the three possible observations?</p> <p>(c) In a circuit, Rahul observed that copper is deposited on the electrode connected to the battery's negative terminal. Seema also</p>	5

repeats the same experiment. But she finds only one copper plate. Therefore, she takes a carbon rod as the negative electrode. Will copper still be deposited on the carbon rod? Explain your answer.

OR

(a) List three uses of electroplating, giving the reason for electroplating in each case.

(b) Illustrate Electroplating of an iron key with copper.

35


(a) Two persons are applying forces on two opposite sides of a moving cart. The cart still moves with the same speed in the same direction. What do you infer about the magnitudes and direction of the forces applied?

(b) Why is it easier to walk on soft sand if we have flat shoes rather than shoes with sharp heels (or pencil heels)?

(c) A force of 50 N is applied on an area of 2 m². Compute pressure being applied to the area. Also, mention the unit of pressure.

OR

Observe the figures given below carefully.



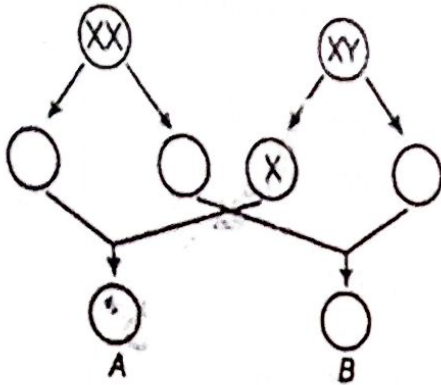
(a) Volume of water in each vessel is shown above. Arrange them in order of decreasing pressure at the base of each vessel. Explain the reason.

(b) A chapatti maker is a machine that converts small balls of dough into round chapatti. What effect does force have in this process?

(c) An archer shoots an arrow in the air horizontally. However, after moving some distance, the arrow falls to the ground. Name the initial force that sets the arrow in motion. Explain why the arrow ultimately falls down.

5

(i) Fill the blank circles in figure and identify the sex of child A and B.



(ii) What will happen if the egg is not fertilized in the female reproductive system?

(iii) Name the hormone which would be released during the following situations.

- A frightened person
- Growth of a child to adult
- Development of secondary sexually characters in males
- Development of tadpole to frog

OR

(a) Salma had a very soft and smooth skin during her childhood. As she entered adolescence, she developed pimples on her face. Can you explain the reasons for the appearance of pimples on her face and suggest ways to prevent them?

(b) Our government has legalised the age for marriage in boys and girls. Give reasons as to why one should get married after a certain age.

(c) Lila always eats only dal and rice in every meal. She often falls ill and has become prone to diseases. Can you suggest changes in her diet which can make her healthy and free from disease?

Section E

Global warming is the rise in the temperature of the atmosphere of the

37 Earth. This results, among other things, in the melting of polar glaciers, which leads to a rise in the sea level, causing floods in the coastal areas.

(a) Increased concentration of which gas mainly causes global warming? What will happen if that particular gas becomes zero?

(b) What impacts you will observe on plants due to increased global warming?

(c) Suggest two ways to reduce the impact of global warming.

4

38 Preservatives are used to protect our foodstuff for a longer time. Answer as per questions asked in different boxes.

Pickle	Preservative name	
Jam and Jellies	Preservative name	
Milk	Name of process	Definition of process
Sugar	How act as a preservative?	
Chemical preservative	Example 1	Example 2

4

39 Ram and Shyam while returning from school saw a laborer pushing hard to move a heavy box. Ram immediately ran to him and started helping him in pushing the box whereas Shyam brought two iron bars and asked the labor to put them below the box and then to push the box.

(a) What are the factors that affect friction?

(b) Who will help the labour more-Ram or Shyam? How?

(c) Give two methods of reducing friction.

4



SINDHI HIGH SCHOOL, BENGALURU
ANNUAL EXAMINATION [2023-24]
SUBJECT: SOCIAL SCIENCE

Class: VIII
Date: 23.3.2024
No of Sides: 6


Max Marks: 80
Reading Time: 15 mins
Writing Time: 3 hrs


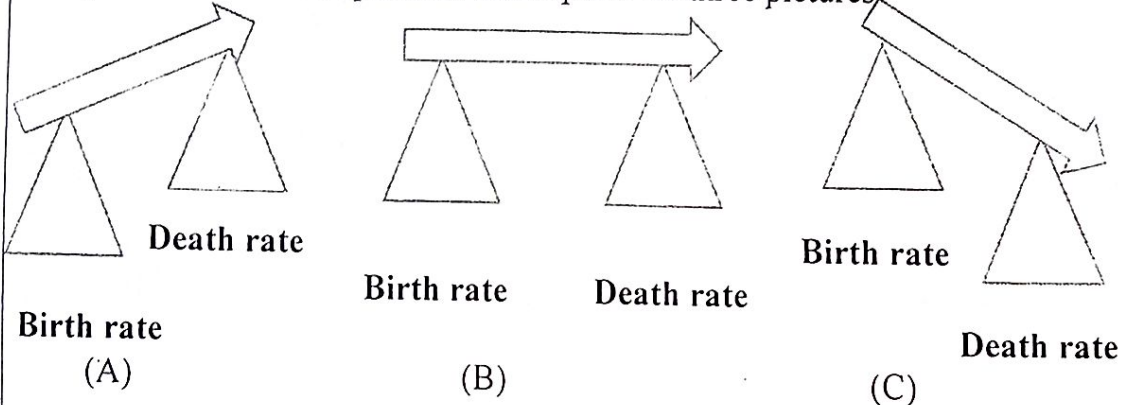
GENERAL INSTRUCTIONS:

- i. Question paper comprises Six Sections – A, B, C, D, E and F There are 37 questions in the question paper. All questions are compulsory.
- ii. Section A - From question 1 to 20 are MCQs of 1 mark each.
- iii. Section B-Question no 21 to 24 are Very Short Answer Type Questions, carrying 2 marks each. Answer to each question should not exceed 40 words.
- iv. Section C contains Q 25 to Q 29 are Short Answer Type Questions, carrying 3 marks each. Answer to each question should not exceed 60 words.
- v. Section D-Question no. 30 to 33 are long answer type questions carrying 5 marks each. Answer to each question should not exceed 120 words.
- vi. Section-E- Questions no from 34 to 36 are case based questions with three sub questions and are of 4 marks each.
- vii. Section F-Question no. 37 is map based, carrying 5 marks with two parts, 37a. from History (2 marks) and 37b. from Geography (3 marks).
- viii. There is no overall choice in the question paper. However, an internal choice has been provided in few questions Only one of the choices in such questions have to be attempted.
- ix. In addition to this, separate instructions are given with each section and question, wherever necessary.

SECTION -A		16.30-30
	Choose the best option:	
1.	Bigha is- (a) A large farm (b) Agents of Planters (c) A unit of measurement of land (d) Agents of company	(1)
2.	Which fundamental Right will be violated if a group of people are not given permission to open a Telugu medium school in Kerala? (a) Right to freedom (b) Right against exploitation (c) Cultural and Educational right (d) Right to equality.	(1)
3.	_____ refers to the number and abilities of the people. (a) Man- made resource (b) Human Resource (c) Natural Resource (d) Resource	(1)
4.	Trenches are made in front of the barriers to collect water under _____ method to conserve soil. (a) Mulching (b) Contour ploughing (c) Intercropping (d) Shelter belts	(1)

5.	<p>Match the following:</p> <table border="1" style="width: 100%; border-collapse: collapse;"> <thead> <tr> <th style="width: 50%; text-align: center;">A</th> <th style="width: 50%; text-align: center;">B</th> </tr> </thead> <tbody> <tr> <td>1. Shifting cultivation.</td> <td>(i)Wheat and maize are commercially grown</td> </tr> <tr> <td>2. Nomadic herding.</td> <td>(ii)Food and fodder crops grown and rearing of livestock.</td> </tr> <tr> <td>3. Commercial grain farming.</td> <td>(iii) Is also known as slash and burn agriculture</td> </tr> <tr> <td>4. Mixed farming.</td> <td>(iv) Movement arises in response to climatic Constraints and terrain</td> </tr> </tbody> </table> <p>a. 1-iii, 2-iv, 3-i, 4-ii (b)1- ii, 2-iv, 3- iii, 4- i b. 1-iv, 2- ii, 3-ii, 4-iv (d) 1-i, 2-iii, 3-iv, 4-ii</p>	A	B	1. Shifting cultivation.	(i)Wheat and maize are commercially grown	2. Nomadic herding.	(ii)Food and fodder crops grown and rearing of livestock.	3. Commercial grain farming.	(iii) Is also known as slash and burn agriculture	4. Mixed farming.	(iv) Movement arises in response to climatic Constraints and terrain	(1)
A	B											
1. Shifting cultivation.	(i)Wheat and maize are commercially grown											
2. Nomadic herding.	(ii)Food and fodder crops grown and rearing of livestock.											
3. Commercial grain farming.	(iii) Is also known as slash and burn agriculture											
4. Mixed farming.	(iv) Movement arises in response to climatic Constraints and terrain											
6.	<p>The 2nd largest manufacturers of commercial vehicles in India is</p> <p>(a) Mahindra Motors (b) Tata Motors (c) Hindustan Motors (d) Ashok Leyland</p>	(1)										
7.	<p>Identify the work of State Government from the given list.</p> <p>(a) The decision of the Indian Government to maintain peaceful relations with China. (b) Introduction of a new train connection between Ajmer and Mysore. (c)The decision of the Madhya Pradesh government to discontinue Board exams in Class VIII for all schools under this Board. (d) Introduction of a new 1000 rupee note.</p>	(1)										
8.	<p>EVM for the first time was used in</p> <p>(a) 2007 (b) 2004 (c) 1990 (d) 2003</p>	(1)										
9.	<p>Match the following:</p> <table style="width: 100%;"> <tr> <td style="width: 50%;">1. Van Gujjars</td> <td style="width: 50%;">i. Andhra Pradesh</td> </tr> <tr> <td>2. Labadis</td> <td>ii. Punjab</td> </tr> <tr> <td>3. Bakarwals</td> <td>iii. Kulu</td> </tr> <tr> <td>4. Gaddis</td> <td>iv. Kashmir</td> </tr> </table> <p>(a) 1-ii,2-iv,3-iii,4-i (b) 1-ii,2-iv,3-i,4-iii (c) 1-iv,2-ii,3-iii,4-i (d) 1-ii,2-i,3-iv,4-iii</p>	1. Van Gujjars	i. Andhra Pradesh	2. Labadis	ii. Punjab	3. Bakarwals	iii. Kulu	4. Gaddis	iv. Kashmir	(1)		
1. Van Gujjars	i. Andhra Pradesh											
2. Labadis	ii. Punjab											
3. Bakarwals	iii. Kulu											
4. Gaddis	iv. Kashmir											
10.	<p>_____ argued that education ought to develop a person's mind and soul.</p> <p>(a) Rabindranath Tagore (b) Raja Ram Mohan Rao (c) Mahatma Gandhi (d) Ishwar Chandra Vidyasagar</p>	(1)										
11.	<p>The existence of more than one level of government in a country is called _____</p> <p>(a) Federalism (b) Secularism (c) Coercion (d) Intervention</p>	(1)										
12.	<p>Identify the incorrect statements from the following.</p> <p>(A) A History of British India was written by James Mill. (B) Census operations were held every year. (C) Warren Hasting was the first governor-General of India. (D) James Mill divided Indian History into three period-Hindu, Muslim, and Christian.</p> <p>(a) A,C (b) B,C (c) A,D (d) B,D</p>	(1)										
13.	<p>How many members are nominated in Rajya Sabha by President of India?</p> <p>(a) 2 (b) 12 (c) 15 (d) 20</p>	(1)										

14.	Complete the following	(10)									
	<table border="1"> <tr> <td>1</td> <td>Input</td> <td>Raw material, labour and transport</td> </tr> <tr> <td>2</td> <td></td> <td>Wide range of function</td> </tr> <tr> <td>3</td> <td>Output</td> <td></td> </tr> </table>	1	Input	Raw material, labour and transport	2		Wide range of function	3	Output		
1	Input	Raw material, labour and transport									
2		Wide range of function									
3	Output										
15.	Example of Co-operative sector industry (a)TISCO (b)Maruti Udyog (c) Sudha dairy (d)None of the above	(1)									
16.	Assertion (A)-The mid-day meal that children now receive in government and government-aided schools is because of PIL. Reason (R) - the Supreme Court in the early 1980s devised a mechanism of Public Interest Litigation or PIL to increase access to justice. (a) Both A and R are true and R is the correct explanation of A. (b) Both A and R are correct but R is not the correct explanation of A. (c) Only A is correct. (d) Both A and R are wrong.	(1)									
17.	Name the three presidencies of British India. (a) Bombay, Hyderabad and Madras (b) Hyderabad, Bombay and Bengal (c) Bengal, Bombay and Madras (d) Kolkata, Hyderabad and Bengal	(1)									
18.	Prakash Hinduja manages the group finances in Geneva _____ (a) Germany (b) Switzerland (c) France (d) Italy	(1)									
19.	What refers to the State's effort to influence a particular matter in accordance with the principles of the constitution? (a) Coercion (b) Intervene (c) Meditation (d) Encroachment	(1)									
20.	Complete the analogy; Arya Samaj: Swami Dayanand Saraswati:: Satyashodhak Samaj: _____	(1)									
	SECTION – B	2x4=8									
	Q. no. 21 to 24 are very short answer questions										
21.	The Judiciary has played a crucial role in democratic India. Justify the statement.	(2)									
22.	Differentiate between Agro based and Forest based industries.	(2)									
23.	Explain the factors that affect the location of industries.	(2)									
24.	(a) Identify the picture and name the personality. (b) What was her demand?	(2)									
		(1) (1)									
	SECTION – C	3x5=15									
	Q.no. 25 to 29 are short answer questions.										
25.	What was the impact of partition of Bengal in the year 1905?	(3)									

26.	<p>Observe the picture given below and answer the following questions.</p>  <p>(a) Identify the hill located in Orissa? (b) Which Adivasis community inhabited in those hill? (c) What could be the reason for the displacement of this Adivasis community?</p>	(1+1+1=3)
27.	List out the features of Intensive Subsistence farming.	(3)
28.	(a) What is Manual scavenging? (b) What did the government do to protect the scavengers from serious health hazards?	(1+2=3)
29.	<p>Study the Balance of Population and explain the three pictures.</p>  <p>(A) Birth rate Death rate (B) Birth rate Death rate (C) Birth rate Death rate</p>	(3)
SECTION - D		
Q.no. 30 to 33 are long answer questions		
30.	Mention and explain geographical factors that affect the distribution of population. <p style="text-align: center;">Or</p> i. What does the Population pyramid show? ii. What is Population density? What is Population density of the whole world and India? iii. Define Birth Rate.	5x4=20 (5) (2+2+1=5)
31.	(a) What is Sanitation? (b) What does Article 21 of our constitution state? (c) How has 'Sulabh' addressed the problem of sanitation in India? <p style="text-align: center;">Or</p> What are Public Facilities and how does the government get money for it?	(1) (1) (3) (1+4=5)

2.	<p>How did Jyotirao Phule and other reformers justify their criticism of caste inequality in society?</p> <p style="text-align: center;">Or</p> <p>(a) Girls were not sent to school for different reasons. Explain (b) Women involved themselves in their upliftment. Justify</p>	(5) (2+3=5)
33.	<p>Describe the various forms that Non-Cooperation movement took in different parts of India.</p> <p style="text-align: center;">Or</p> <p>(a) How did Gandhiji emerge as a mass leader? (b) Give an account of the Dandi March by Gandhiji.</p>	(5) (2+3=5)
SECTION - E		4x3=12
Q. 34 to 36 are Case - Based questions		
34.	<p>Read the extract and answer the following questions</p> <p>The Bhopal disaster brought the issue of environment to the forefront. Several thousands of persons who were not associated with the factory in any way were greatly affected because of the poisonous gases leaked from the plant. This made people realize that the existing laws, though weak, only covered the individual worker and not persons who might be injured to industrial accidents.</p> <p>(i) When did the Bhopal Gas Tragedy occur? (ii) Mention the name of Poisonous gas. (iii) What are the advantages of foreign companies in setting up production in India?</p>	(1) (1) (2)
35.	<p>Read the extract and answer the following questions</p> <p>Growing population and their ever growing demand has led to a large scale destruction of forest cover and arable land and has created a fear of losing this natural resource. Therefore, the present rate of degradation of land must be checked. Afforestation, land reclamation, regulated use of chemical pesticide and fertilisers and checks on overgrazing are some of the common methods used to conserve land resources.</p> <p>i. Define land use. ii. Mention the human factors that determine land use. iii. List the classification of land on the basis of ownership.</p>	(1) (1) (2)
36.	<p>Read the extract and answer the following questions:</p> <p>In 1783, a person named William Jones arrived in Calcutta. He had an appointment as a junior judge at the supreme Court that the company had set up. In addition to being an expert in law, Jones was a linguist. He had studied Greek and Latin at Oxford, knew French and English, had picked up Arabic from a friend, and had also learnt Persian. At Calcutta, he began spending many hours a day with pandits who taught him the subtleties of Sanskrit language, grammar and poetry.</p> <p>i. Define Linguist. ii. Who helped William Jones to establish Asiatic Society in Bengal? iii. Who were Orientalists? Why was Hindu College established in Benaras in 1791?</p>	(1) (1) (2)

SECTION - F

Map -based questions

- 37.
- a) Identify the following places marked on the political map of India with the help of given clues.
 - (i) The place where INC was established.
 - (ii) The place of Jallianwala Bagh Massacre.
 - b) On the given world map mark the following
 - i. Any two countries where cotton is grown as a major crop?
 - ii. Any one iron ore producing country

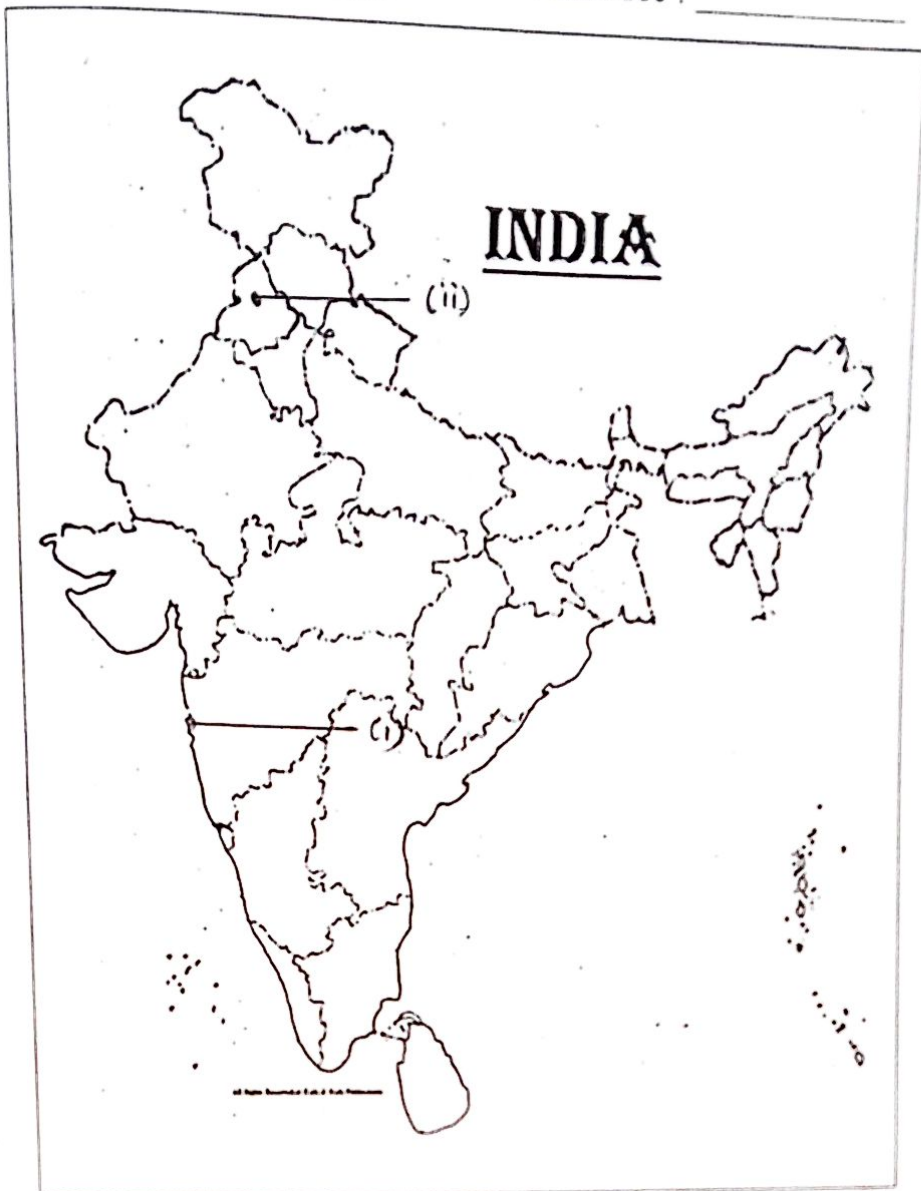
.....

Note : Detach the map sheet and attach with the answer script.


Name : _____

Class/sec : _____

37a



37b.





SINDHI HIGH SCHOOL, BENGALURU

Annual Exam 2023-24

Computer Science

Class: VIII

Marks: 30

No of Printed Sides: 2

Reading Time: 8:00 – 8:10 AM

Writing Time: 8:10 – 9:10 AM

Date: 30-04-2024

I. Fill in the blanks:

5X1=5

1. A _____ is formed by the intersection of a table row and a column.
2. HTML stands for _____
3. _____ is a cyber-attack that involves the use of charging ports.
4. A _____ button automatically resets form controls to their initial values.
5. The <Table> tag uses _____ element for creating table rows.

II. Write True or False.

4x0.5=2

1. You cannot insert a video to a webpage.
2. Cyber bullying is a antivirus software.
3. There are two different kinds of hyperlinks.
4. You can enter multiline text into an HTML form.

III. Give two examples for each of the following:

3X1=3

1. Antivirus Software
2. Attributes of the <Table> tag
3. HTML form Controls

IV. Unscramble the jumbled letters using the clue given below:

4X1=4

1. MASP
Hint : Unsolicited commercial email.
2. SMREFA
Hint: It is used to divide the browser window into multiple sections.
3. NIPGSHIH
Hint : Type of scam which is used to obtain personal information.
4. MFRO
Hint : The method that is used to take user's input.

V. Write the difference between:

2X1=2

1. Cyber Bullying and Cyber Stalking
2. RowSpan and Column Span

VI. Choose the correct option:

- Which of the following methods is used to submit the form?
 - Post
 - Submit
 - Send
 - None of these
- Caption added to the table using <Caption> tag appears by default at _____
 - Top, Left
 - Bottom, Left
 - Top, Center
 - Bottom, Center
- What is the extension to save HTML document?
 - .xlsx
 - .docx
 - .py
 - .html
- Which of the following is not a malware?
 - Virus
 - Worm
 - Trojan
 - None
- Which of the following is not a TextInput Controls?
 - List
 - Single-line text
 - Password
 - Multi-line text
- Which of the following is not a key symptom of virus in a computer?
 - Frequent Crashes
 - Repeated harassment and threatening messages
 - Unusually moderate execution
 - Changes to your landing page or passwords

VII. Answer the following:

3X2=6

- What are the various ways to safely browse the web?
- Describe the four tags that are used to create a table in an HTML document.
- Explain any four button controls and their types in HTML.

VIII. What do the following tags stands for:

2X1=2

- <p>
- <a>
-

- <src>

IX. Write the HTML code to create the table given below in your HTML document:3

Emp No	Name		Date of Joining
	First	Last	
1	Pradeep	Raj	20-05-1978
2	Auna	Singh	15-08-1968
